

Centre Number	Candidate Number	Name
---------------	------------------	------

UNIVERSITY OF CAMBRIDGE INTERNATIONAL EXAMINATIONS
General Certificate of Education Ordinary Level

CHEMISTRY

5070/02

Paper 2 Theory

May/June 2005

1 hour 30 minutes

Candidates answer on the Question Paper.

Additional Materials: Answer Paper

READ THESE INSTRUCTIONS FIRST

Write your Centre number, candidate number and name on all the work you hand in.

Write in blue or black pen.

Do not use staples, paper clips, highlighters, glue or correction fluid.

You may use a calculator.

Sections A

Answer **all** questions.

Write your answers in the spaces provided on the Question Paper.

Section B

Answer any **three** questions.

Write your answers on any lined pages and/or separate answer paper.

At the end of the examination, fasten all your work securely together.

The number of marks is given in brackets [] at the end of each question or part question.

A copy of the Periodic Table is printed on page 16.

For Examiner's Use	
Section A	
B7	
B8	
B9	
B10	
Total	

This document consists of **13** printed pages and **3** lined pages.



Section A

Answer **all** the questions in this section in the spaces provided.

The total mark for this section is 45.

A1 Choose from the following substances to answer the questions below.

aluminium oxide
ammonia
barium sulphate
calcium carbonate
carbon monoxide
lead(II) iodide
nitrogen dioxide
silicon dioxide

Each substance can be used once, more than once or not at all.

Name a substance which

(a) is a gas that causes acid rain,

.....[1]

(b) has a giant molecular structure,

.....[1]

(c) is amphoteric,

.....[1]

(d) is an insoluble yellow solid.

.....[1]

A2 Iron is one of the most important metals. It is a transition element.
Most iron is used in the alloy steel.

(a) Explain, in terms of metallic bonding, why iron is a good electrical conductor.

.....
.....
.....[2]

(b) Describe how different proportions of carbon can modify the physical properties of steel.

.....
.....
.....[2]

(c) When underwater, iron pipes will rust relatively rapidly.

(i) State the essential conditions needed for the rusting of iron.

.....

(ii) Pieces of magnesium are often attached to underwater iron pipes. Explain how the magnesium protects the iron pipes against rusting.

.....
.....
.....

[3]

(d) Write **two** typical properties that are generally common **only** to transition elements.

1.

2.[2]

(e) A sample of a compound of iron is analysed. The sample contains 0.547 g of potassium, 0.195 g of iron, 0.252 g of carbon and 0.294 g of nitrogen.
Calculate the empirical formula of this compound.

Answer[3]

A3 This question is about the Periodic Table.

The diagram below shows part of the original Periodic Table first published by Mendeleev in 1869.

	Period 1	Period 2	Period 3	Period 4		Period 5	
Group 1	H	Li	Na	K	Cu	Rb	Ag
Group 2		Be	Mg	Ca	Zn	Sr	Cd
Group 3		B	Al	*	*	Y	In
Group 4		C	Si	Ti	*	Zr	Sn
Group 5		N	P	V	As	Nb	Sb
Group 6		O	S	Cr	Se	Mo	Te
Group 7		F	Cl	Mn	Br	*	I

The asterisks (*) show gaps in the table that Mendeleev deliberately left.

(a) Which group of elements in a modern Periodic Table is missing from Mendeleev's Periodic Table?

.....[1]

(b) Write two **other** differences between Mendeleev's original table and a modern Periodic Table.

.....

[2]

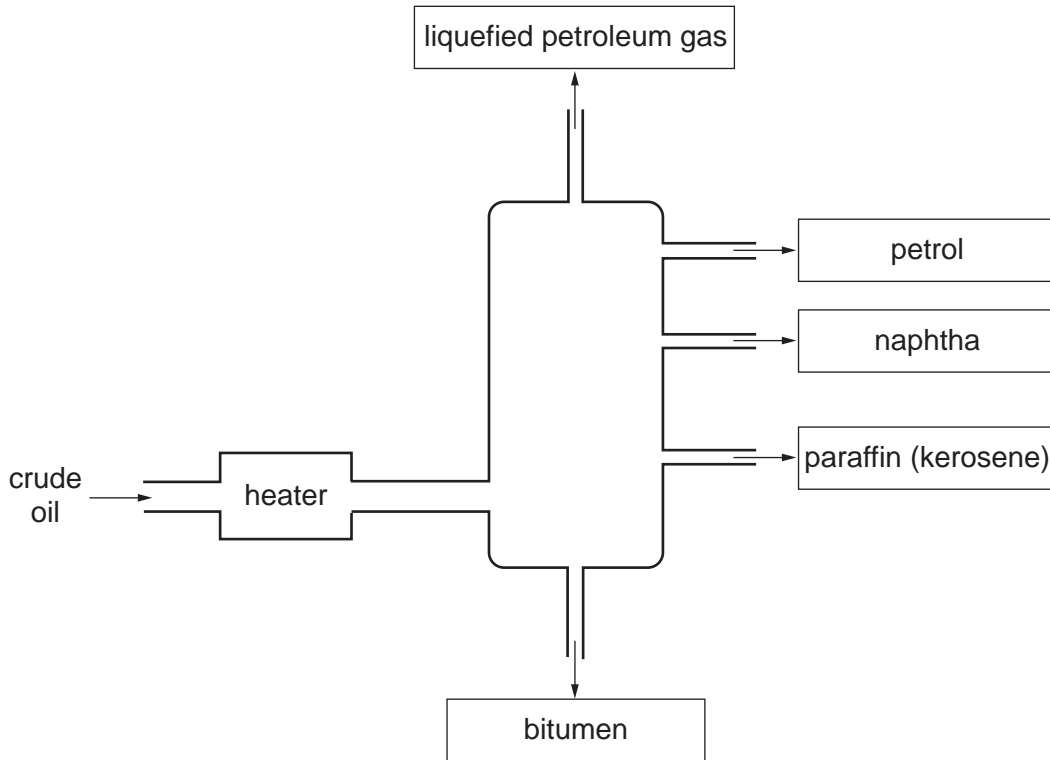
(c) Find rubidium, Rb, in the Periodic Table provided on page 16.
 Predict the reaction between rubidium and cold water.
 Include observations and the chemical equation.

.....

[3]

A4 Petroleum is a mixture of hydrocarbons. In an oil refinery it is separated into fractions by fractional distillation.

The diagram shows a fractionating column and some of the fractions obtained from petroleum.



(a) State the physical property on which the separation depends.

.....[1]

(b) (i) State **one** use for the naphtha fraction.

.....

(ii) State **one** use for the bitumen fraction.

.....

[2]

(c) The liquefied petroleum gas fraction contains the saturated hydrocarbons methane, CH_4 , and ethane, C_2H_6 .

(i) What is the meaning of the term *saturated hydrocarbon*?

.....

.....

- (ii) Draw a 'dot and cross' diagram to show the bonding in methane. You only need to draw the outer electrons of carbon.

[4]

- (d) Describe the importance of cracking in the oil refining process.

.....

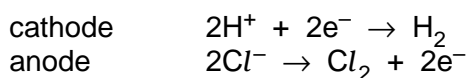
[2]

A5 Chlorine, hydrogen and sodium hydroxide are made by the electrolysis of concentrated aqueous sodium chloride.

- (a) Aqueous sodium chloride contains the following ions, Na^+ , H^+ , OH^- and Cl^- .

Concentrated aqueous sodium chloride can be electrolysed using inert electrodes.

The electrode reactions are represented below.



- (i) Explain why hydrogen, **not** sodium, is formed at the cathode.

.....

- (ii) Suggest why, as the electrolysis proceeds, the concentration of sodium hydroxide in the electrolyte increases.

.....

[2]

(b) Describe a chemical test for each of the gases produced during the electrolysis of concentrated aqueous sodium chloride.

(i) chlorine

.....
.....

(ii) hydrogen

.....
.....

[2]

(c) Describe the use of chlorine in the purification of water.

.....
.....[1]

(d) Describe an advantage of using hydrogen as a possible fuel in the future.

.....
.....[1]

(e) Name the products, if any, of the reaction of chlorine with

(i) aqueous potassium fluoride,

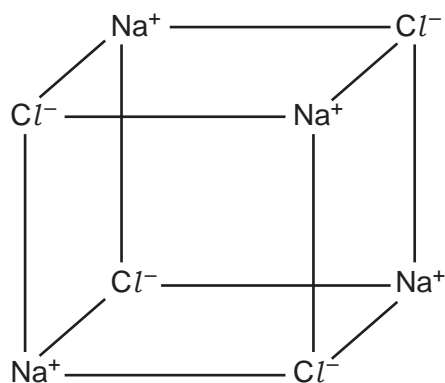
.....

(ii) aqueous sodium bromide.

.....

[2]

A6 The structure of sodium chloride is drawn below.



- (a)** Sodium chloride is an ionic solid.
Draw the electronic structure of both a sodium ion and a chloride ion.

sodium ion

chloride ion

[2]

- (b)** Sodium chloride has a melting point of about 800 °C.

- (i)** Explain why sodium chloride has a high melting point.

.....

.....

.....

- (ii)** Magnesium oxide, MgO, has a similar structure to sodium chloride. Suggest why the melting point of magnesium oxide is higher than that of sodium chloride.

.....

.....

[3]

- (c)** Explain why solid sodium chloride will not conduct electricity but molten sodium chloride will.

.....

..... [1]

Section B

Answer **three** questions from this section.

The total mark for this section is 30.

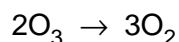
B7 Ozone, O₃, is an atmospheric pollutant in the lower atmosphere but is beneficial higher up in the atmosphere.

(a) How is ozone formed in the lower atmosphere? [1]

(b) Ozone in the upper atmosphere is being depleted. Describe briefly how this is happening and some of the health problems caused by ozone depletion. [3]

(c) At room temperature ozone decomposes slowly to form oxygen, O₂.

The decomposition can be represented by the equation below. The reaction is exothermic. One mole of ozone will release 143 kJ when it is fully decomposed.



(i) In terms of the energy changes that take place during bond breaking and bond making, explain why this reaction is exothermic.

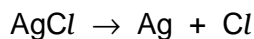
(ii) Explain why the **rate** of this decomposition increases as the **temperature** increases.

(iii) Calculate the energy released when 16 g of ozone is decomposed. [6]

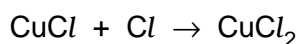
- B8** Sunglasses can be made from photochromic glass. When bright light strikes photochromic glass it darkens.

Photochromic glass contains small amounts of silver chloride, AgCl , and copper(I) chloride, CuCl .

In the presence of bright light, silver chloride decomposes into silver atoms which make the glass go dark, and into chlorine atoms.



Chlorine atoms immediately react with copper(I) chloride to make copper(II) chloride.



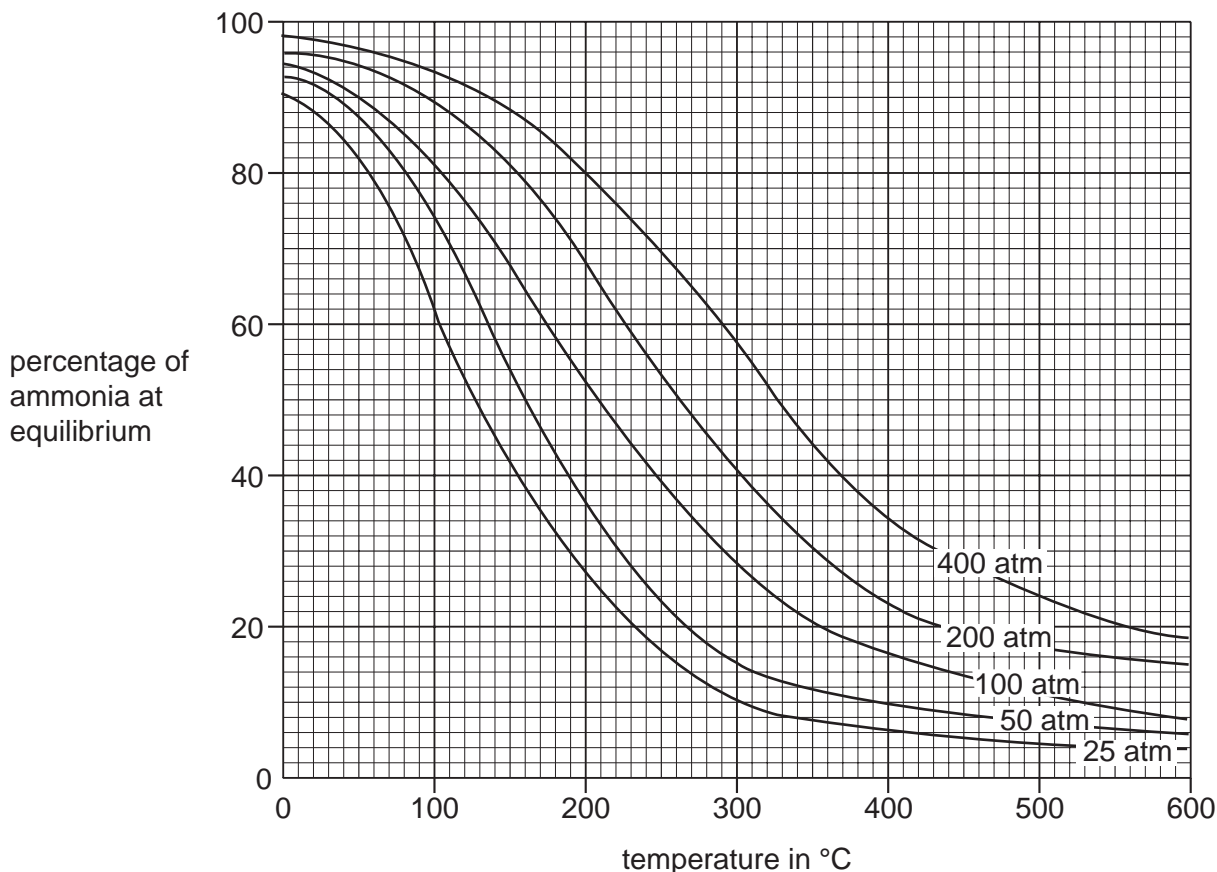
When the exposure to bright light ends, silver atoms reduce copper(II) chloride back into copper(I) chloride and silver chloride.

- (a) Calculate the maximum mass of silver that can be formed when 0.287 g of silver chloride decomposes. [2]
- (b) Explain why the reaction between copper(I) chloride and chlorine involves both oxidation and reduction. [3]
- (c) Construct the equation for the reaction between silver and copper(II) chloride. [1]
- (d) Aqueous copper(II) chloride reacts with aqueous sodium hydroxide to form a precipitate.
- (i) Write the ionic equation, including state symbols, for the precipitation reaction.
- (ii) What is the name and colour of the precipitate?

[4]

B9 Ammonia is manufactured by the Haber process. Ammonia is used to manufacture nitrogenous fertilisers such as ammonium nitrate.

(a) The graphs below give information about the percentage of ammonia present in the equilibrium mixture at different temperatures and pressures.



The reaction requires the use of a catalyst, which operates most efficiently within the temperature range 280 – 450 °C.

- (i) Name the catalyst used in the Haber process.
- (ii) Write a balanced equation for the formation of ammonia in the Haber process.
- (iii) Which conditions of temperature and pressure give the highest percentage of ammonia at equilibrium within the catalyst operating temperature range?
- (iv) Suggest why the normal working temperature used in the Haber process is often over 400 °C.

[5]

(b) Describe and explain the effect of a catalyst on the rate of a reaction. Explain how the use of a catalyst can reduce the overall energy requirement for the Haber process.

[3]

(c) A farmer spreads a fertiliser containing ammonium nitrate onto his land. The farmer then spreads calcium hydroxide on his land to reduce its acidity.

Write an equation for the reaction between ammonium nitrate and calcium hydroxide. Use this equation to explain why the nitrogen content of the fertiliser will be lowered. [2]

- B10** All members of the carboxylic acid homologous series contain the $-\text{CO}_2\text{H}$ group.
The table shows the formula of the first three members of this homologous series.

carboxylic acid	formula
methanoic acid	HCO_2H
ethanoic acid	$\text{CH}_3\text{CO}_2\text{H}$
propanoic acid	$\text{C}_2\text{H}_5\text{CO}_2\text{H}$

- (a) Name the unbranched carboxylic acid that has four carbon atoms per molecule. [1]
- (b) Give the formula of the sixth member of the carboxylic acid homologous series. [1]
- (c) Ethanol, $\text{C}_2\text{H}_5\text{OH}$, reacts with ethanoic acid to make ethyl ethanoate.
Draw the structure of ethyl ethanoate. [1]
- (d) Name a reagent that can be used to convert ethanol into ethanoic acid. [1]
- (e) Magnesium reacts with ethanoic acid to make magnesium ethanoate and hydrogen.

Write the equation for this reaction. Use the equation to calculate the mass of magnesium needed to react completely with 50 cm^3 of 1.0 mol/dm^3 of ethanoic acid. [3]

- (f) Suggest why the reaction between magnesium and 1.0 mol/dm^3 ethanoic acid is much slower than the reaction between magnesium and 1.0 mol/dm^3 hydrochloric acid. [2]
- (g) Aqueous sodium hydroxide neutralises dilute ethanoic acid.
Write the ionic equation for this reaction. [1]

.....

.....

.....

.....

.....

.....

.....

.....

.....

.....

.....

.....

.....

.....

.....

.....

.....

.....


.....

.....

.....

.....

A series of horizontal dotted lines for writing.

A series of 30 horizontal dotted lines spaced evenly down the page, providing a guide for handwriting practice.

DATA SHEET
The Periodic Table of the Elements

		Group											
	I	II	III	IV	V	VI	VII	0					
	7 Li Lithium 3	9 Be Beryllium 4	<div style="border: 1px solid black; padding: 5px; display: inline-block;"> 1 H Hydrogen 1 </div>										4 He Helium 2
	23 Na Sodium 11	24 Mg Magnesium 12											11 B Boron 5
	39 K Potassium 19	40 Ca Calcium 20	27 Al Aluminium 13	28 Si Silicon 14	31 P Phosphorus 15	32 S Sulphur 16	35.5 Cl Chlorine 17	40 Ar Argon 18					
	85 Rb Rubidium 37	88 Sr Strontium 38	55 Mn Manganese 25	56 Fe Iron 26	59 Co Cobalt 27	64 Cu Copper 29	65 Zn Zinc 30	70 Ga Gallium 31	73 Ge Germanium 32	75 As Arsenic 33	79 Se Selenium 34	80 Br Bromine 35	84 Kr Krypton 36
	133 Cs Caesium 55	137 Ba Barium 56	91 Zr Zirconium 40	101 Ru Ruthenium 44	103 Rh Rhodium 45	106 Pd Palladium 46	108 Ag Silver 47	115 In Indium 49	119 Sn Tin 50	122 Sb Antimony 51	128 Te Tellurium 52	127 I Iodine 53	131 Xe Xenon 54
	226 Ra Radium 88	227 Ac Actinium 89	140 Ce Cerium 58	141 Pr Praseodymium 59	144 Nd Neodymium 60	150 Sm Samarium 62	152 Eu Europium 63	157 Gd Gadolinium 64	162 Dy Dysprosium 66	165 Ho Holmium 67	169 Tm Thulium 69	173 Yb Ytterbium 70	175 Lu Lutetium 71
	87 Fr Francium		232 Th Thorium 90	238 U Uranium 92	238 Np Neptunium 93	238 Pu Plutonium 94	238 Am Americium 95	238 Cm Curium 96	238 Bk Berkelium 97	238 Fm Fermium 100	238 Md Mendelevium 101	238 No Nobelium 102	238 Lr Lawrencium 103
			181 Ta Tantalum 73	186 Re Rhenium 75	192 Ir Iridium 77	195 Pt Platinum 78	197 Au Gold 79	204 Tl Thallium 81	207 Pb Lead 82	209 Bi Bismuth 83	210 Po Polonium 84	210 At Astatine 85	210 Rn Radon 86

*58-71 Lanthanoid series
†90-103 Actinoid series

Key

a	X
b	

a = relative atomic mass
X = atomic symbol
b = proton (atomic) number

The volume of one mole of any gas is 24 dm³ at room temperature and pressure (r.t.p.).