



UNIVERSITY OF CAMBRIDGE INTERNATIONAL EXAMINATIONS
International General Certificate of Secondary Education

CANDIDATE
NAME

CENTRE
NUMBER

--	--	--	--	--

CANDIDATE
NUMBER

--	--	--	--

* 5 2 5 0 3 2 8 4 2 9 *

COMBINED SCIENCE

0653/22

Paper 2 (Core)

October/November 2013

1 hour 15 minutes

Candidates answer on the Question Paper.

No Additional Materials are required.

READ THESE INSTRUCTIONS FIRST

Write your Centre number, candidate number and name on all the work you hand in.

Write in dark blue or black pen.

You may use a pencil for any diagrams or graphs.

Do not use staples, paper clips, glue or correction fluid.

DO NOT WRITE IN ANY BARCODES.

Answer **all** questions.

Electronic calculators may be used.

You may lose marks if you do not show your working or if you do not use appropriate units.

A copy of the Periodic Table is printed on page 20.

At the end of the examination, fasten all your work securely together.

The number of marks is given in brackets [] at the end of each question or part question.

This document consists of **19** printed pages and **1** blank page.



- 1 (a) Fig. 1.1 shows apparatus that can be used to test the electrical conductivity of the materials contained in the beakers **Q**, **R** and **S**.

For
Examiner's
Use

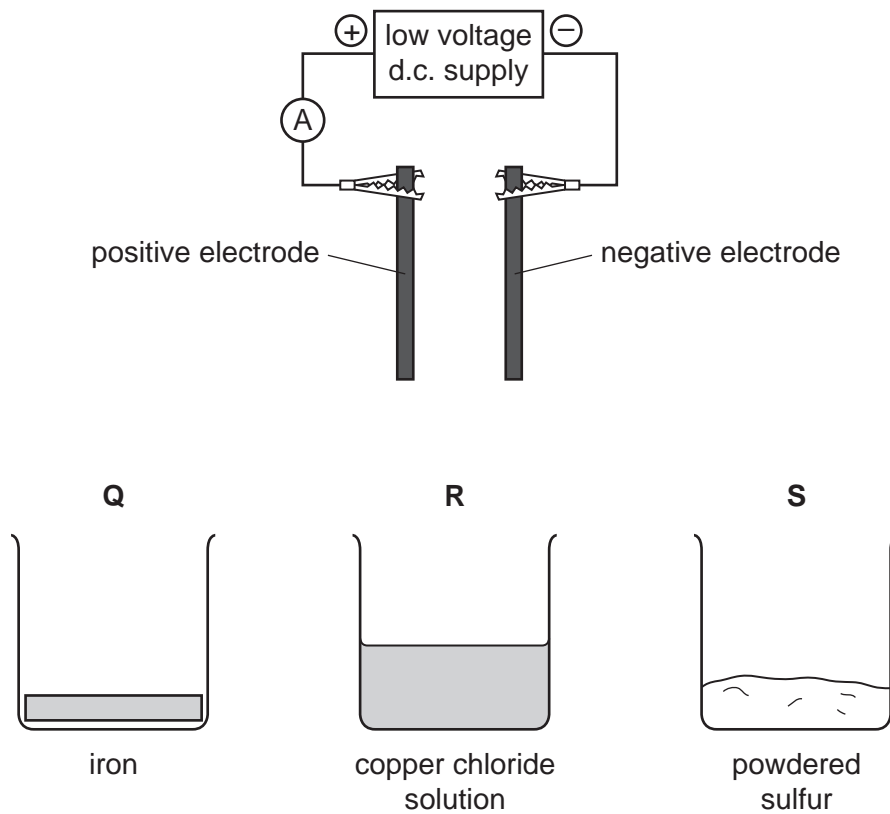


Fig. 1.1

- (i) The contents of beakers **Q** and **S** are tested for electrical conductivity by lowering the electrodes into the beakers.

Predict and explain the results.

beaker **Q**

prediction

explanation

beaker **S**

prediction

explanation [3]

(ii) When the electrodes are lowered into the solution in beaker **R**, the following observations are made.

- Bubbles of gas form on the surface of the positive electrode.
- A layer of an orange solid appears on the surface of the negative electrode.

Name the gas that forms and the substance in the orange layer.

gas

orange layer [2]

(iii) State the name of the process described in (ii).

..... [1]

(b) Fig. 1.2 shows names and molecular structure diagrams of some compounds containing carbon.

Draw straight lines to match the structures with names. One line has been drawn as an example.

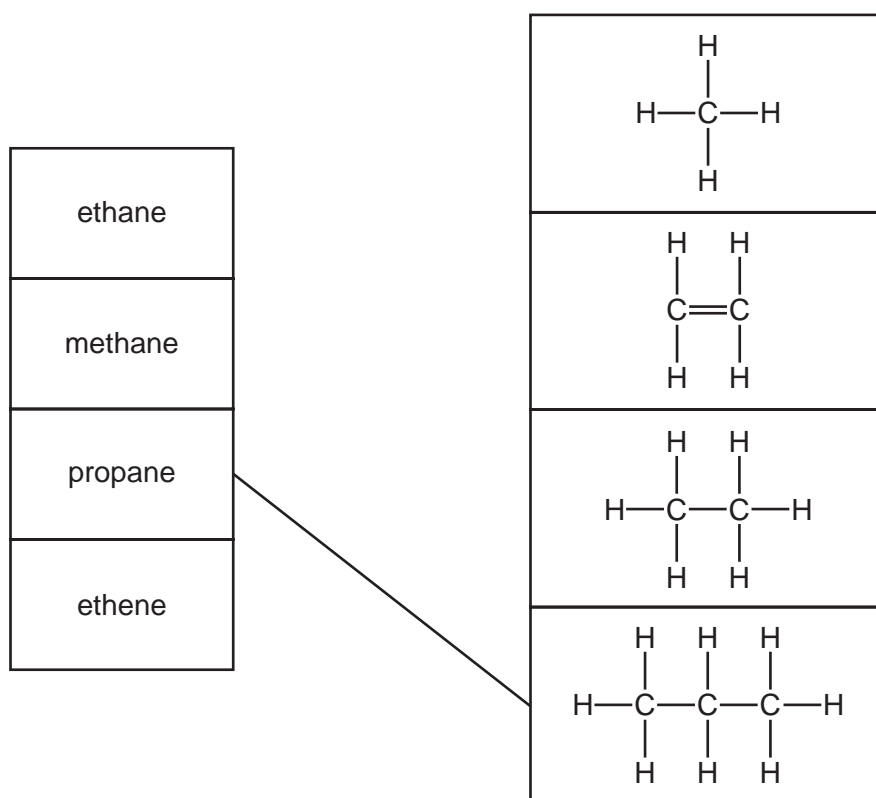


Fig. 1.2

[2]

- (c) Fig. 1.3 shows the structure of one molecule of a type of compound called a CFC (chlorofluorocarbon).

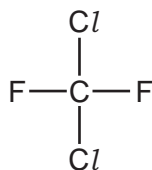


Fig. 1.3

- (i) State the chemical formula of the molecule whose structure is shown in Fig. 1.3.

..... [1]

- (ii) Explain whether or not the molecule in Fig. 1.3 is an example of a hydrocarbon.

.....
..... [1]

For
Examiner's
Use

2 (a) Use the words or phrases below to complete the sentences.

amplitudes frequencies slows down speed speeds up

Each word or phrase can be used once, more than once, or not at all.

(i) Light when it travels from air to glass.

(ii) In the electromagnetic spectrum, the waves are arranged in order of

.....

(iii) 20 Hz to 20 000 Hz is the approximate human range of audible

.....

(iv) The of sound waves determines the loudness of the sounds.

[4]

(b) Fig. 2.1 shows a demonstration of sound transmission using a bell jar.

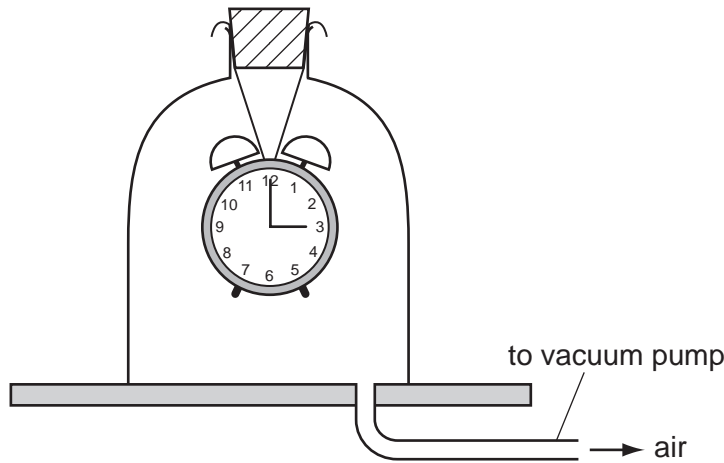


Fig. 2.1

As the air is removed from the bell jar, the ringing sound from inside the bell jar gets quieter. When all the air has been removed, the bell cannot be heard.

Explain these observations.

.....

.....

.....

.....

.....

[3]

3 (a) Fig. 3.1 shows cross-sections of a root and a stem.

For
Examiner's
Use

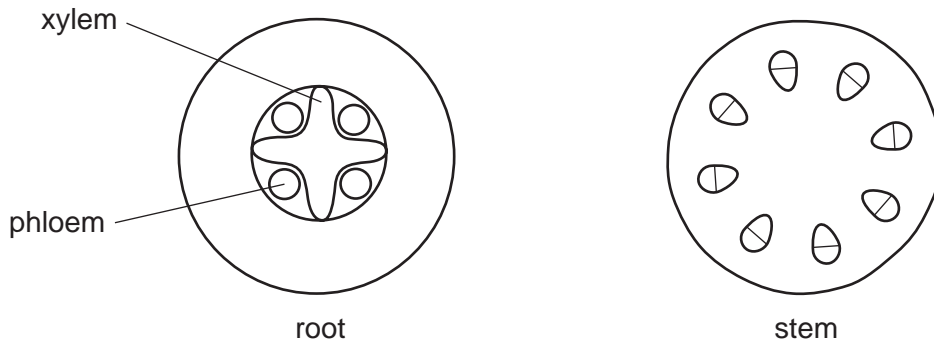


Fig. 3.1

(i) On Fig. 3.1, use label lines to indicate the positions of the xylem and phloem on the diagram of the stem. [2]

(ii) Describe the functions of xylem and phloem.

xylem

.....

.....

phloem

.....

.....

[4]

(b) The roots of most plants have root hairs near their tips.

Researchers grew two types of plants, **A** and **B**, in soil with different concentrations of phosphate ions. They measured the mean number of root hairs in a small area of the roots, and also the mean length of the root hairs.

Table 3.1 shows their results.

Table 3.1

type of plant	phosphate concentration	mean number of root hairs per unit area	mean length of root hairs / micrometres
A	low	1.26	175
	high	1.70	149
B	low	1.41	225
	high	1.85	52

(i) Describe **two** ways in which the addition of phosphate ions to the soil affects the root hairs in type **A** plants.

1

.....

2

..... [2]

(ii) Compare the effect of adding phosphate ions to the soil for type **A** plants and for type **B** plants.

.....

.....

..... [2]

(iii) Explain why a reduction in the length of its root hairs could reduce the rate of growth of a plant.

.....

.....

.....

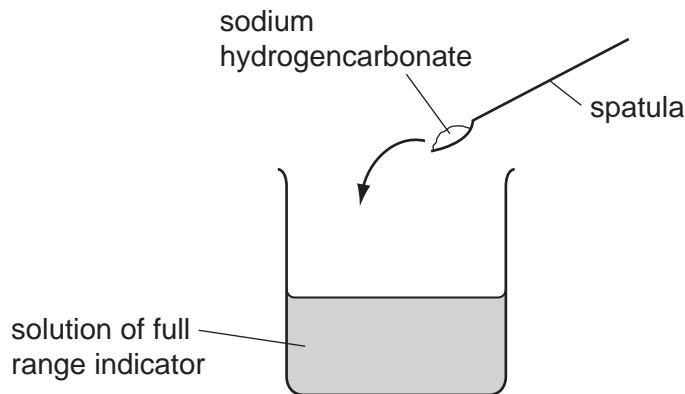
.....

..... [3]

For
Examiner's
Use

4 Sodium hydrogencarbonate, NaHCO_3 , is a white solid compound which is soluble in water.

- (a) A student adds some sodium hydrogencarbonate to a beaker which contains an aqueous solution of full range indicator (Universal Indicator).



When the sodium hydrogencarbonate dissolves, the solution changes colour from green to blue.

- (i) State and explain briefly how the pH of the mixture changes when the sodium hydrogencarbonate dissolves.

.....
 [2]

- (ii) The student then adds excess dilute hydrochloric acid to the blue solution.

Apart from an increase in volume, state **two** observations that are made when the acid is added.

1

 2
 [2]

(b) Fig. 4.1 shows apparatus a teacher uses to demonstrate the heating of sodium hydrogencarbonate.

For
Examiner's
Use

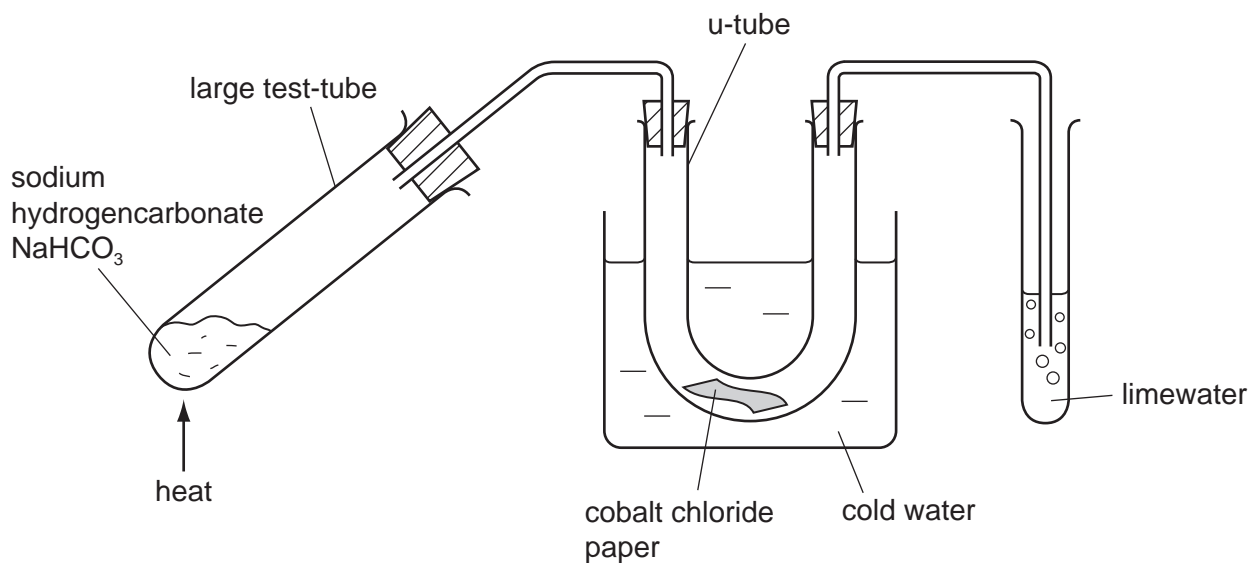


Fig. 4.1

The solid is heated strongly for a few minutes.

- The cobalt chloride paper changes colour from blue to pink.
- A gas bubbles out through the limewater, turning it cloudy.

After the reaction, a white solid, sodium carbonate, remains in the large test-tube.

(i) Explain how the observations show that both water and carbon dioxide are produced.

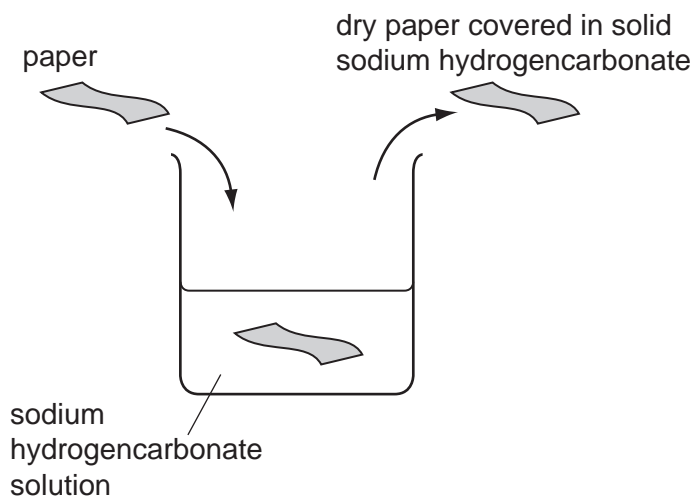
.....

 [2]

(ii) A student places a piece of paper into a solution of sodium hydrogencarbonate.

She removes the paper and allows it to dry. She notices that crystals of solid sodium hydrogencarbonate are left on the paper.

For
Examiner's
Use



The student found that it is now difficult to set fire to the paper.

Use the results of the experiment in Fig. 4.1 to suggest why the student finds it difficult to get the paper to burn.

.....

.....

.....

..... [2]

5 (a) Fig. 5.1 shows a bicycle with two lights **A** and **B** at the front.

For
Examiner's
Use




Fig. 5.1

Fig. 5.2 shows the circuit used to power the two lights.

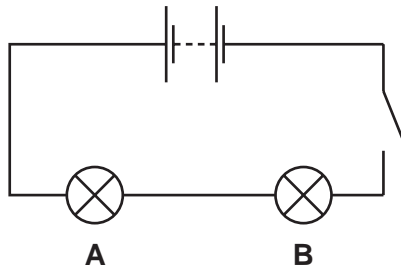


Fig. 5.2

(i) State the name given to this type of circuit arrangement.

..... [1]

(ii) To calculate the resistance of light **A**, the current flowing through it and the voltage across it must be measured.

On Fig. 5.2, using the correct symbols, draw an ammeter and a voltmeter correctly connected to make these measurements. [4]

(iii) The resistance of light **A** in the circuit is 5Ω and the resistance of light **B** is 10Ω .

Calculate the combined resistance of the two lights.

State the formula that you use and show your working.

formula

working

..... Ω [2]

(b) The bicycle was made from a block of aluminium alloy of mass 9000g and volume 3000cm^3 .

Calculate the density of aluminium in g/cm^3 .

State the formula that you use and show your working.

formula

working

..... g/cm^3 [2]

(c) The bicycle is ridden by a cyclist. The cyclist is cooled by sweating.

Explain, in terms of particles, how sweating cools his body.

.....

.....

..... [1]

6 Fig. 6.1 shows the male reproductive system.

For
Examiner's
Use

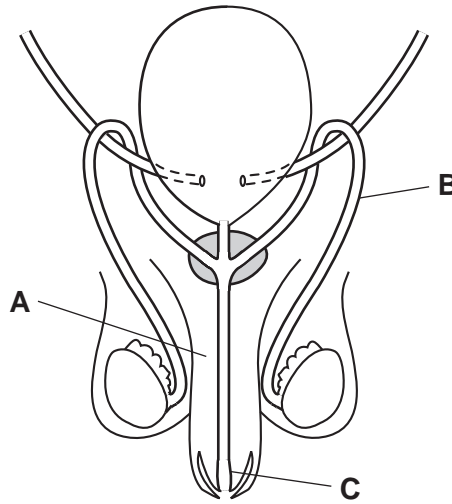


Fig. 6.1

(a) Name the parts labelled **A**, **B** and **C**.

- A [3]
- B
- C [3]

(b) An infection may block the tube labelled **B**. If the tube on the other side is also blocked, the man may be unable to have children.

Explain why.

-
-
- [2]

(c) HIV/AIDS is a disease that can be passed on by sexual intercourse.

(i) What does HIV stand for?

- [1]

(ii) State **one** way in which a man with HIV/AIDS can avoid passing it to another person.

- [1]

7 (a) The elements chlorine, bromine and iodine are found in Group 7 of the Periodic Table.

- (i) Complete Table 7.1 by writing the physical state (solid, liquid or gas) at room temperature (20 °C) of the elements.

Table 7.1

element	physical state
bromine	
iodine	

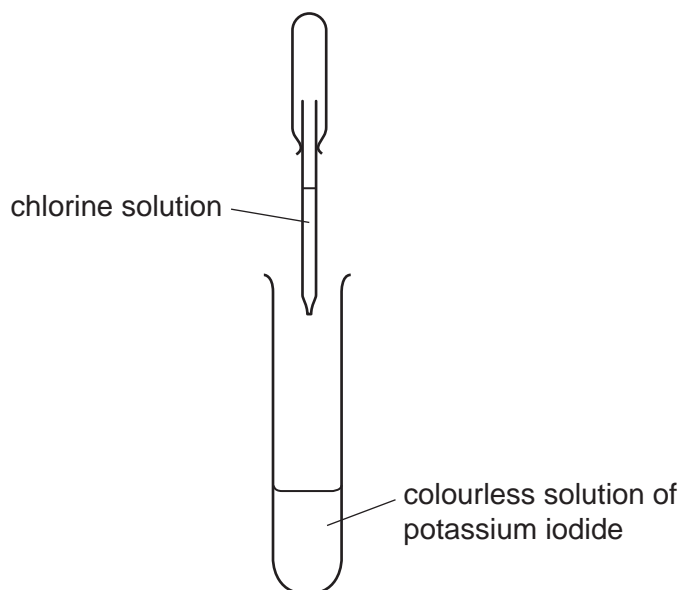
[1]

- (ii) Explain why an iodine atom is larger and heavier than a bromine atom.

.....

 [2]

- (iii) An aqueous solution containing chlorine is added to a colourless solution of potassium iodide.



Describe and explain briefly what is observed in this reaction.

observation

explanation

..... [2]

For
Examiner's
Use

(b) Explain why a dilute solution of chlorine is usually added to drinking water before it is supplied to homes.

.....
.....
..... [2]

(c) Helium is a gas found in Group 0 of the Periodic Table.

Some helium is added to a flask containing chlorine and left for a few days.

Predict and explain whether the flask now contains a mixture of the two elements or a compound.

.....
.....
..... [2]

*For
Examiner's
Use*

8 (a) Fig. 8.1 shows a car moving along a road.

(i) Draw and label arrows on Fig. 8.1 to show the directions of the driving and friction forces acting on the car. [1]




Fig. 8.1

(ii) State **one** source of friction on the moving car.
..... [1]

(iii) The driving and friction forces are balanced.
Explain what is meant by the phrase *forces are balanced*.
.....
..... [1]

(iv) Describe the movement of the car when these forces are balanced.
.....
..... [1]

(v) Apart from the driving and friction forces there are other forces acting on the car.
Name **one** of these forces.
..... [1]

(b) (i) The car travels a distance of 400m down a hill in 25 seconds.

Calculate the average speed of the car.

State the formula that you use and show your working.

formula

working

..... m/s [2]

(ii) The car is going faster at the bottom of the hill than it was at the top.

State the type of energy which the car has gained. [1]

(iii) State the type of energy which the car will have lost as it travels down the hill.

..... [1]

*For
Examiner's
Use*

9 (a) Fig. 9.1 shows a food web in the Antarctic Ocean.

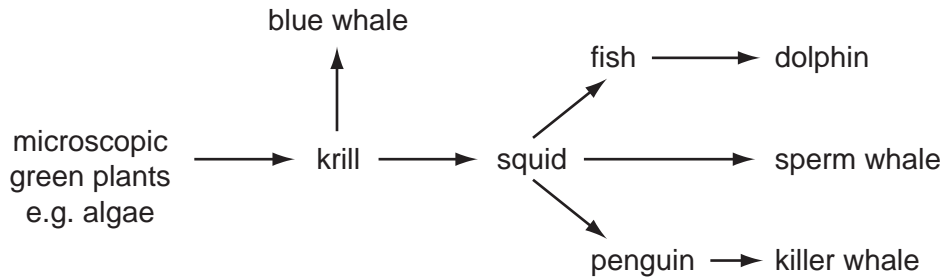


Fig. 9.1

(i) State the term used for organisms such as the microscopic green plants that make their own organic nutrients.

..... [1]

(ii) Name **one** organic nutrient that is made by the green plants.

..... [1]

(iii) State what is shown by the arrows in the food web.

..... [1]

(b) Fishing boats catch large quantities of krill in the Antarctic Ocean.

Suggest how this could affect the numbers of the organisms in the food web in Fig. 9.1.

.....

 [2]

(c) There is concern that global warming will damage the environment in the Antarctic Ocean.

Name **two** gases that contribute to global warming.

1
 2 [2]

