

Centre Number	Candidate Number	Name
---------------	------------------	------

CAMBRIDGE INTERNATIONAL EXAMINATIONS
International General Certificate of Secondary Education

COMBINED SCIENCE

0653/03

Paper 3

October/November 2003

1 hour 15 minutes

Candidates answer on the Question Paper.
No Additional Materials are required.

READ THESE INSTRUCTIONS FIRST

Write your Centre number, candidate number and name on all the work you hand in.
Write in dark blue or black pen in the spaces provided on the Question Paper.
You may use a soft pencil for any diagrams, graphs or rough working.
Do not use staples, paper clips, highlighters, glue or correction fluid.

Answer **all** questions.

At the end of the examination, fasten all your work securely together.

The number of marks is given in brackets [] at the end of each question or part question.

A copy of the Periodic Table is printed on page 16.

For Examiner's Use	
1	
2	
3	
4	
5	
6	
7	
8	
9	
10	
TOTAL	

If you have been given a label, look at the details. If any details are incorrect or missing, please fill in your correct details in the space given at the top of this page.

Stick your personal label here, if provided.

This document consists of **15** printed pages and **1** blank page.



- 1 (a) Fig. 1.1 shows some information about three enzymes which act in the human digestive system.

enzyme	substance which the enzyme digests	substance which is produced	place where the enzyme works
	starch	sugar (maltose)	mouth and small intestine
lipase		fatty acids and glycerol	small intestine
protease	proteins		

Fig. 1.1

Complete the table by writing the appropriate word or words in each of the four spaces. [4]

- (b) Seeds and fruits are important sources of nutrients for many animals, including humans. Many seeds and fruits contain sugar, starch and protein.

- (i) Explain how the presence of these nutrients can help the seeds or fruits to be dispersed to new areas.

.....

[2]

- (ii) Describe how you would test a seed for the presence of protein, and state what you would see if the test was positive.

.....

[3]

2 (a) Fig. 2.1 shows an observer's eye looking at a lamp in a mirror.

(i) On Fig. 2.1, draw a ray of light to show how the observer is able to see the lamp in the mirror.

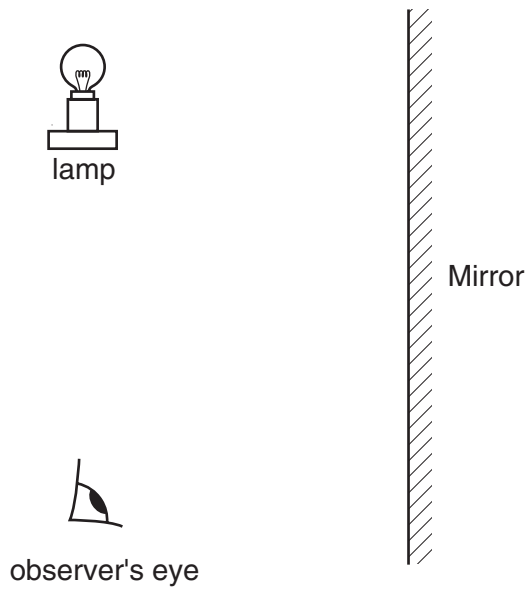


Fig. 2.1

[3]

(ii) On Fig. 2.1 show the position of the image.

[2]

(b) Light waves and radio waves are both parts of the electromagnetic spectrum.

(i) State **one** property that is the same for both of these waves.

.....[1]

(ii) State **one** property that is different for each of these waves.

.....[1]

- 3 Fig. 3.1 shows a blast furnace which is used to extract iron from iron ore. Iron ore is a rock containing iron(III) oxide.

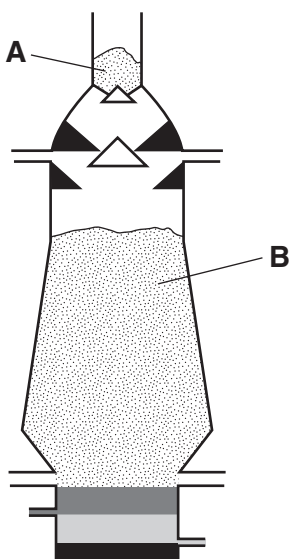


Fig. 3.1

- (a) (i) Iron ore and coke are added to the furnace at **A**. Name the other raw material that is added at **A**.

.....[1]

- (ii) Iron(III) oxide is reduced to iron at **B**.

Write a **word** equation for the reaction at **B**.

.....[2]

- (iii) Explain why iron(III) oxide is said to be *reduced* in this reaction.

.....[1]

- (b) (i) The chemical formula of iron(III) oxide is Fe_2O_3 .
The formula of the oxide ion is O^{2-} .
Deduce the formula of the iron ion.
Show how you obtained your answer.

.....[2]

- (ii) Calculate the relative formula mass of iron(III) oxide.
Show your working.

.....[2]

- 4 A student investigated the effect of temperature on the transpiration rate of potted plants.

She took three similar plants growing in pots, and added the same volume of water to the soil in each pot. Then she fastened a transparent polythene bag around each one. For plants **A** and **B**, the bag covered the pot only. For plant **C**, the bag covered the pot and also the plant, as shown in Fig. 4.1.

Plants **A** and **C** were left in a room kept at 20°C. Plant **B** was left in a room kept at 10°C.

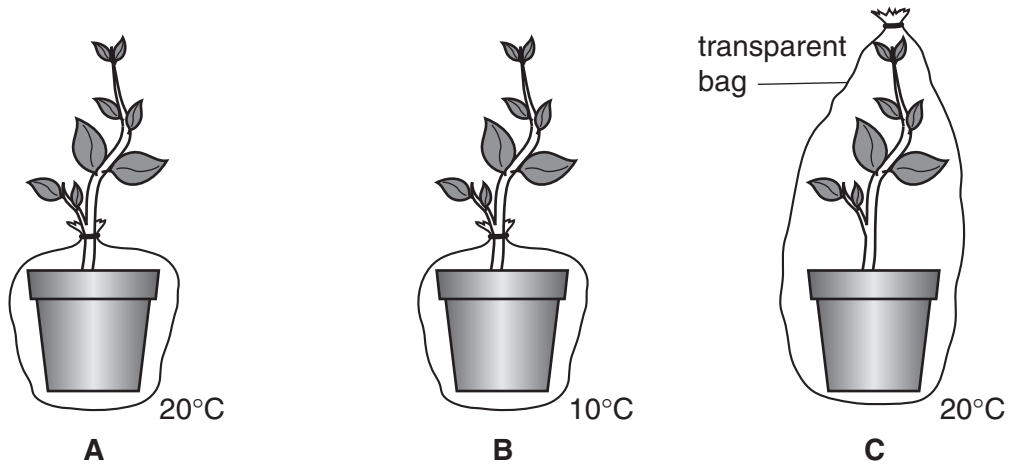


Fig. 4.1

Each plant was placed on a balance and its mass was recorded at the same time each day for one week. The loss of mass was then calculated. The results are shown in Fig. 4.2.

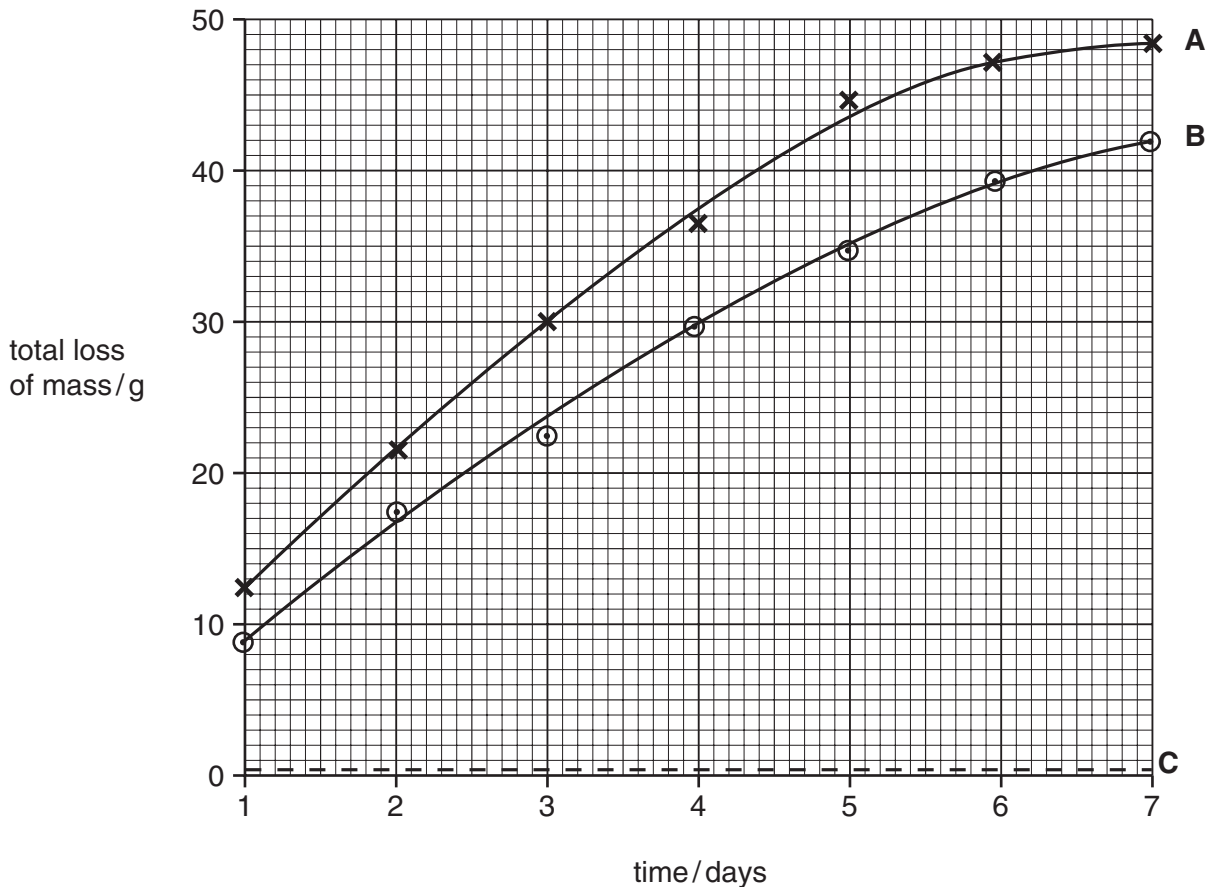


Fig. 4.2

0653/03/O/N/03

(a) (i) Suggest **one** factor which should have been the same in the two rooms, to make sure that the student's results were valid.

.....[1]

(ii) Explain why the polythene bags needed to be transparent.

.....
.....
.....[2]

(b) (i) Explain why plants **A** and **B** lost mass, but plant **C** did not.

.....
.....
.....
.....[3]

(ii) Explain why plant **A** lost more mass than plant **B**.

.....
.....
.....
.....[3]

(iii) The conditions in the two rooms were kept constant throughout the experiment. Suggest why plant **A** lost mass more slowly towards the end of the week.

.....
.....
.....[2]

- 6 Most of the compounds in petroleum (crude oil) are hydrocarbons but some sulphur compounds are also present.

(a) (i) Write a **word** equation for the complete combustion of the hydrocarbon, methane.

[2]

(ii) Explain how sulphur compounds may cause damage to the environment if they are not removed from petroleum.

.....

[3]

(b) Some hydrocarbons are cracked to form smaller molecules such as ethene which contains a double bond.

Describe how a hydrocarbon is tested to find out whether it contains a double bond.

.....

[2]

(c) Fig. 6.1 shows the displayed formula of a small part of a molecule of poly(ethene).

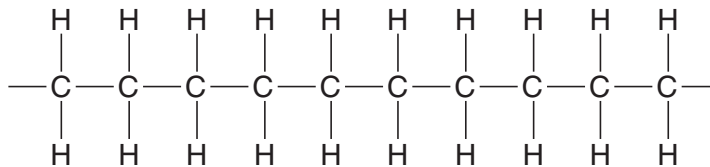


Fig. 6.1

(i) State the number of ethene monomers which have joined to form this section of the poly(ethene) molecule.

.....[1]

(ii) Explain your answer to (i).

.....
[1]

7 Fig. 7.1 shows two beakers **A** and **B**, both full of water.

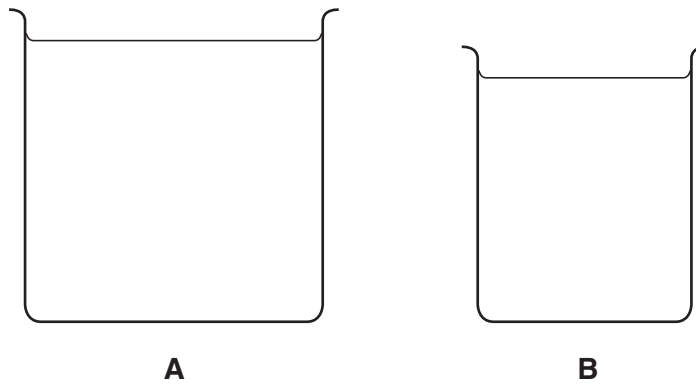


Fig. 7.1

(a) (i) When both beakers are full of water, beaker **A** has twice the weight of beaker **B**. What can be said about the masses of the two beakers when they are full of water?

Explain your answer.

.....

.....

.....[2]

(ii) Fig. 7.2 shows the two beakers balanced on a thin beam.

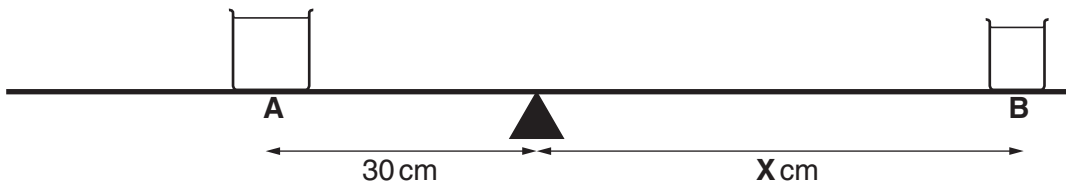


Fig. 7.2

What is the value of **X**?

Explain your answer.

.....

.....

.....[2]

(b) Fig. 7.3 shows a conical flask and a drinking glass, both full of water.

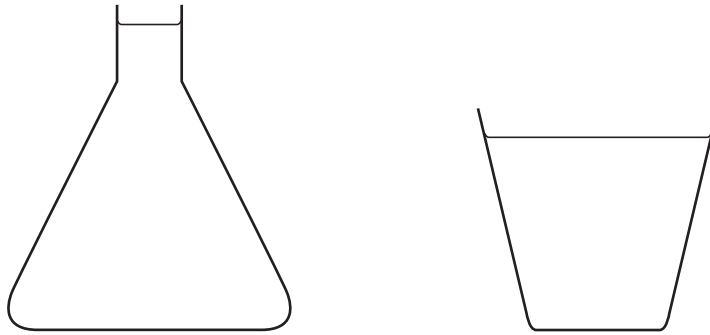


Fig. 7.3

- (i) Label each container with a **C** to show the approximate centre of mass in each one. [2]
- (ii) Explain why it is more difficult to tip over the conical flask than the drinking glass. You may draw diagrams if it helps your answer.

.....

.....

..... [2]

8 If an onion bulb is cut open, it can be seen to be made of several different layers. Each layer has a very thin 'skin' covering its inner surface. This skin is called an *epidermal tissue*.

(a) What is the term that is used to describe a structure such as an onion bulb, which is made of several tissues grouped together?

.....[1]

(b) The outline shows the shape of a plant cell in the epidermal tissue of an onion bulb.



(i) In the space below, draw a diagram to show how at least six of these cells are grouped together to form the epidermal tissue.

[3]

(ii) State **one** way in which a cell in onion epidermal tissue differs from a cell in the palisade mesophyll of a leaf. Explain the reason for this difference.

difference

.....

reason for this difference

.....

.....[3]

9 The pH values of three acidic solutions are shown below.

vinegar	4
lemon juice	3
battery acid	1

(a) The formula of the ion present in all acids is H⁺.

(i) Which of the solutions shown above contains the highest concentration of this ion?

.....[1]

(ii) Write an ionic equation which describes the neutralisation of any acid by any alkali.

.....[2]

(b) When sodium carbonate is added to dilute hydrochloric acid, there is a vigorous reaction in which the acid is neutralised and a gas is given off.

Complete the word equation for this reaction.



[3]

(c) Copper(II) oxide is an insoluble base.

Describe how crystals of copper(II) sulphate could be made from copper(II) oxide and dilute sulphuric acid.

.....

.....

.....

.....

.....

.....

.....

.....[4]

10 Radon is a gas that emits alpha radiation.

(a) Explain why alpha radiation is dangerous to human beings.

.....
.....
.....[2]

(b) Explain why alpha radiation is affected by an electric field.

.....
.....
.....[2]

(c) Describe the differences in the structure of the nucleus of a radon-220 atom before and after the emission of an alpha particle.

.....
.....
.....[2]

DATA SHEET
The Periodic Table of the Elements

		Group																																																																																																																																																																																																																																																																																																																																								
		I	II	III	IV	V	VI	VII	VIII	IX	X																																																																																																																																																																																																																																																																																																																															
1	1																																																																																																																																																																																																																																																																																																																																									
		1 H Hydrogen																																																																																																																																																																																																																																																																																																																																								
3	4	7 Li Lithium	9 Be Beryllium																																																																																																																																																																																																																																																																																																																																							
11	12	23 Na Sodium	24 Mg Magnesium																																																																																																																																																																																																																																																																																																																																							
19	20	39 K Potassium	40 Ca Calcium	45 Sc Scandium	48 Ti Titanium	51 V Vanadium	52 Cr Chromium	55 Mn Manganese	56 Fe Iron	59 Co Cobalt	59 Ni Nickel	64 Cu Copper	65 Zn Zinc	70 Ga Gallium	73 Ge Germanium	75 As Arsenic	79 Se Selenium	80 Br Bromine	84 Kr Krypton																																																																																																																																																																																																																																																																																																																							
37	38	85 Rb Rubidium	88 Sr Strontium	89 Y Yttrium	91 Zr Zirconium	93 Nb Niobium	96 Mo Molybdenum	101 Ru Ruthenium	103 Rh Rhodium	106 Pd Palladium	108 Ag Silver	112 Cd Cadmium	115 In Indium	119 Sn Tin	122 Sb Antimony	127 I Iodine	131 Xe Xenon	133 Cs Caesium	137 Ba Barium	139 La Lanthanum	178 Hf Hafnium	181 Ta Tantalum	184 W Tungsten	186 Re Rhenium	190 Os Osmium	192 Ir Iridium	195 Pt Platinum	197 Au Gold	201 Hg Mercury	204 Tl Thallium	207 Pb Lead	209 Bi Bismuth	210 Po Polonium	210 At Astatine	210 Rn Radon																																																																																																																																																																																																																																																																																																							
87	88	226 Fr Francium	226 Ra Radium	227 Ac Actinium																																																																																																																																																																																																																																																																																																																																						
		*58-71 Lanthanoid series																																																																																																																																																																																																																																																																																																																																								
		†90-103 Actinoid series																																																																																																																																																																																																																																																																																																																																								
		<table border="1" style="width: 100%; border-collapse: collapse; text-align: center;"> <tr> <td style="width: 5%;"></td> <td style="width: 5%;"></td> <td style="width: 10%;">a</td> <td style="width: 10%;">X</td> <td style="width: 10%;">b</td> </tr> <tr> <td style="text-align: center;">Key</td> <td></td> <td>a = relative atomic mass</td> <td>X = atomic symbol</td> <td>b = proton (atomic) number</td> </tr> </table>												a	X	b	Key		a = relative atomic mass	X = atomic symbol	b = proton (atomic) number																																																																																																																																																																																																																																																																																																																					
		a	X	b																																																																																																																																																																																																																																																																																																																																						
Key		a = relative atomic mass	X = atomic symbol	b = proton (atomic) number																																																																																																																																																																																																																																																																																																																																						
103	104	114 Po Polonium	115 At Astatine	116 Rn Radon	117 Uu Ununseptium	118 Uu Ununseptium	119 Uu Ununseptium	120 Uu Ununseptium	121 Uu Ununseptium	122 Uu Ununseptium	123 Uu Ununseptium	124 Uu Ununseptium	125 Uu Ununseptium	126 Uu Ununseptium	127 Uu Ununseptium	128 Uu Ununseptium	129 Uu Ununseptium	130 Uu Ununseptium	131 Uu Ununseptium	132 Uu Ununseptium	133 Uu Ununseptium	134 Uu Ununseptium	135 Uu Ununseptium	136 Uu Ununseptium	137 Uu Ununseptium	138 Uu Ununseptium	139 Uu Ununseptium	140 Uu Ununseptium	141 Uu Ununseptium	142 Uu Ununseptium	143 Uu Ununseptium	144 Uu Ununseptium	145 Uu Ununseptium	146 Uu Ununseptium	147 Uu Ununseptium	148 Uu Ununseptium	149 Uu Ununseptium	150 Uu Ununseptium	151 Uu Ununseptium	152 Uu Ununseptium	153 Uu Ununseptium	154 Uu Ununseptium	155 Uu Ununseptium	156 Uu Ununseptium	157 Uu Ununseptium	158 Uu Ununseptium	159 Uu Ununseptium	160 Uu Ununseptium	161 Uu Ununseptium	162 Uu Ununseptium	163 Uu Ununseptium	164 Uu Ununseptium	165 Uu Ununseptium	166 Uu Ununseptium	167 Uu Ununseptium	168 Uu Ununseptium	169 Uu Ununseptium	170 Uu Ununseptium	171 Uu Ununseptium	172 Uu Ununseptium	173 Uu Ununseptium	174 Uu Ununseptium	175 Uu Ununseptium	176 Uu Ununseptium	177 Uu Ununseptium	178 Uu Ununseptium	179 Uu Ununseptium	180 Uu Ununseptium	181 Uu Ununseptium	182 Uu Ununseptium	183 Uu Ununseptium	184 Uu Ununseptium	185 Uu Ununseptium	186 Uu Ununseptium	187 Uu Ununseptium	188 Uu Ununseptium	189 Uu Ununseptium	190 Uu Ununseptium	191 Uu Ununseptium	192 Uu Ununseptium	193 Uu Ununseptium	194 Uu Ununseptium	195 Uu Ununseptium	196 Uu Ununseptium	197 Uu Ununseptium	198 Uu Ununseptium	199 Uu Ununseptium	200 Uu Ununseptium	201 Uu Ununseptium	202 Uu Ununseptium	203 Uu Ununseptium	204 Uu Ununseptium	205 Uu Ununseptium	206 Uu Ununseptium	207 Uu Ununseptium	208 Uu Ununseptium	209 Uu Ununseptium	210 Uu Ununseptium	211 Uu Ununseptium	212 Uu Ununseptium	213 Uu Ununseptium	214 Uu Ununseptium	215 Uu Ununseptium	216 Uu Ununseptium	217 Uu Ununseptium	218 Uu Ununseptium	219 Uu Ununseptium	220 Uu Ununseptium	221 Uu Ununseptium	222 Uu Ununseptium	223 Uu Ununseptium	224 Uu Ununseptium	225 Uu Ununseptium	226 Uu Ununseptium	227 Uu Ununseptium	228 Uu Ununseptium	229 Uu Ununseptium	230 Uu Ununseptium	231 Uu Ununseptium	232 Uu Ununseptium	233 Uu Ununseptium	234 Uu Ununseptium	235 Uu Ununseptium	236 Uu Ununseptium	237 Uu Ununseptium	238 Uu Ununseptium	239 Uu Ununseptium	240 Uu Ununseptium	241 Uu Ununseptium	242 Uu Ununseptium	243 Uu Ununseptium	244 Uu Ununseptium	245 Uu Ununseptium	246 Uu Ununseptium	247 Uu Ununseptium	248 Uu Ununseptium	249 Uu Ununseptium	250 Uu Ununseptium	251 Uu Ununseptium	252 Uu Ununseptium	253 Uu Ununseptium	254 Uu Ununseptium	255 Uu Ununseptium	256 Uu Ununseptium	257 Uu Ununseptium	258 Uu Ununseptium	259 Uu Ununseptium	260 Uu Ununseptium	261 Uu Ununseptium	262 Uu Ununseptium	263 Uu Ununseptium	264 Uu Ununseptium	265 Uu Ununseptium	266 Uu Ununseptium	267 Uu Ununseptium	268 Uu Ununseptium	269 Uu Ununseptium	270 Uu Ununseptium	271 Uu Ununseptium	272 Uu Ununseptium	273 Uu Ununseptium	274 Uu Ununseptium	275 Uu Ununseptium	276 Uu Ununseptium	277 Uu Ununseptium	278 Uu Ununseptium	279 Uu Ununseptium	280 Uu Ununseptium	281 Uu Ununseptium	282 Uu Ununseptium	283 Uu Ununseptium	284 Uu Ununseptium	285 Uu Ununseptium	286 Uu Ununseptium	287 Uu Ununseptium	288 Uu Ununseptium	289 Uu Ununseptium	290 Uu Ununseptium	291 Uu Ununseptium	292 Uu Ununseptium	293 Uu Ununseptium	294 Uu Ununseptium	295 Uu Ununseptium	296 Uu Ununseptium	297 Uu Ununseptium	298 Uu Ununseptium	299 Uu Ununseptium	300 Uu Ununseptium	301 Uu Ununseptium	302 Uu Ununseptium	303 Uu Ununseptium	304 Uu Ununseptium	305 Uu Ununseptium	306 Uu Ununseptium	307 Uu Ununseptium	308 Uu Ununseptium	309 Uu Ununseptium	310 Uu Ununseptium	311 Uu Ununseptium	312 Uu Ununseptium	313 Uu Ununseptium	314 Uu Ununseptium	315 Uu Ununseptium	316 Uu Ununseptium	317 Uu Ununseptium	318 Uu Ununseptium	319 Uu Ununseptium	320 Uu Ununseptium	321 Uu Ununseptium	322 Uu Ununseptium	323 Uu Ununseptium	324 Uu Ununseptium	325 Uu Ununseptium	326 Uu Ununseptium	327 Uu Ununseptium	328 Uu Ununseptium	329 Uu Ununseptium	330 Uu Ununseptium	331 Uu Ununseptium	332 Uu Ununseptium	333 Uu Ununseptium	334 Uu Ununseptium	335 Uu Ununseptium	336 Uu Ununseptium	337 Uu Ununseptium	338 Uu Ununseptium	339 Uu Ununseptium	340 Uu Ununseptium	341 Uu Ununseptium	342 Uu Ununseptium	343 Uu Ununseptium	344 Uu Ununseptium	345 Uu Ununseptium	346 Uu Ununseptium	347 Uu Ununseptium	348 Uu Ununseptium	349 Uu Ununseptium	350 Uu Ununseptium	351 Uu Ununseptium	352 Uu Ununseptium	353 Uu Ununseptium	354 Uu Ununseptium	355 Uu Ununseptium	356 Uu Ununseptium	357 Uu Ununseptium	358 Uu Ununseptium	359 Uu Ununseptium	360 Uu Ununseptium	361 Uu Ununseptium	362 Uu Ununseptium	363 Uu Ununseptium	364 Uu Ununseptium	365 Uu Ununseptium	366 Uu Ununseptium	367 Uu Ununseptium	368 Uu Ununseptium	369 Uu Ununseptium	370 Uu Ununseptium	371 Uu Ununseptium	372 Uu Ununseptium	373 Uu Ununseptium	374 Uu Ununseptium	375 Uu Ununseptium	376 Uu Ununseptium	377 Uu Ununseptium	378 Uu Ununseptium	379 Uu Ununseptium	380 Uu Ununseptium	381 Uu Ununseptium	382 Uu Ununseptium	383 Uu Ununseptium	384 Uu Ununseptium	385 Uu Ununseptium	386 Uu Ununseptium	387 Uu Ununseptium	388 Uu Ununseptium	389 Uu Ununseptium	390 Uu Ununseptium	391 Uu Ununseptium	392 Uu Ununseptium	393 Uu Ununseptium	394 Uu Ununseptium	395 Uu Ununseptium	396 Uu Ununseptium	397 Uu Ununseptium	398 Uu Ununseptium	399 Uu Ununseptium	400 Uu Ununseptium	401 Uu Ununseptium	402 Uu Ununseptium	403 Uu Ununseptium	404 Uu Ununseptium	405 Uu Ununseptium	406 Uu Ununseptium	407 Uu Ununseptium	408 Uu Ununseptium	409 Uu Ununseptium	410 Uu Ununseptium	411 Uu Ununseptium	412 Uu Ununseptium	413 Uu Ununseptium	414 Uu Ununseptium	415 Uu Ununseptium	416 Uu Ununseptium	417 Uu Ununseptium	418 Uu Ununseptium	419 Uu Ununseptium	420 Uu Ununseptium	421 Uu Ununseptium	422 Uu Ununseptium	423 Uu Ununseptium	424 Uu Ununseptium	425 Uu Ununseptium	426 Uu Ununseptium	427 Uu Ununseptium	428 Uu Ununseptium	429 Uu Ununseptium	430 Uu Ununseptium	431 Uu Ununseptium	432 Uu Ununseptium	433 Uu Ununseptium	434 Uu Ununseptium	435 Uu Ununseptium	436 Uu Ununseptium	437 Uu Ununseptium	438 Uu Ununseptium	439 Uu Ununseptium	440 Uu Ununseptium	441 Uu Ununseptium	442 Uu