

- 1 Work out 72 cents as a percentage of 83 cents.

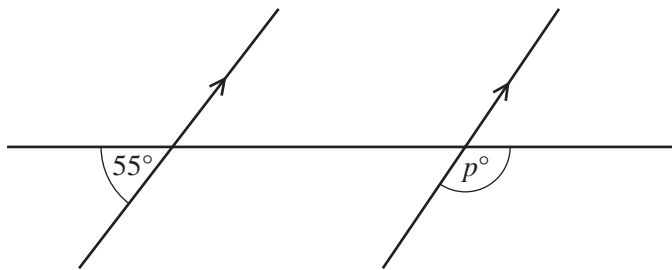
Answer % [1]

- 2 Calculate $\frac{5.27 - 0.93}{4.89 - 4.07}$.

Give your answer correct to 4 significant figures.

Answer [2]

3



NOT TO
SCALE

Find the value of p .

Answer $p =$ [2]

- 4 Calculate 17.5% of 44 kg.

Answer kg [2]

5 Solve the equation.

$$5 - 2x = 3x - 19$$

For
Examiner's
Use

Answer $x =$ [2]

6

S **P** **A** **C** **E** **S**

One of the 6 letters is taken at random.

(a) Write down the probability that the letter is S.

Answer(a) [1]

(b) The letter is replaced and again a letter is taken at random.
This is repeated 600 times.

How many times would you expect the letter to be S?

Answer(b) [1]

7 The length, p cm, of a car is 440 cm, correct to the nearest 10 cm.

Complete the statement about p .

Answer $\leq p <$ [2]

- 8 Emily invests \$ x at a rate of 3% per year simple interest.
After 5 years she has \$20.10 interest.

Find the value of x .

Answer $x =$ [3]

- 9 Find the n th term in each of the following sequences.

(a) $\frac{1}{3}, \frac{2}{4}, \frac{3}{5}, \frac{4}{6}, \frac{5}{7}, \dots$

Answer(a) [1]

(b) 0, 3, 8, 15, 24,

Answer(b) [2]

- 10 Make b the subject of the formula.

$$c = \sqrt{a^2 + b^2}$$

Answer $b =$ [3]

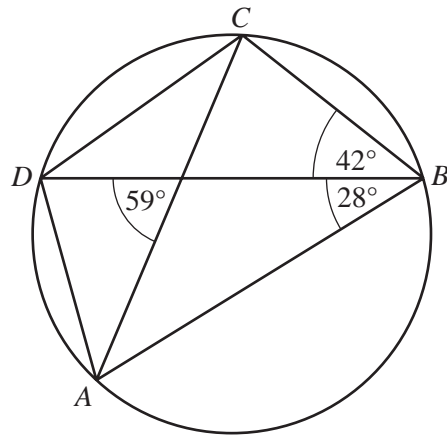
- 11 The volume of a child's model plane is 1200 cm^3 .
The volume of the full size plane is 4050 m^3 .

Find the scale of the model in the form $1:n$.

Answer 1: [3]

12

For
Examiner's
Use



NOT TO
SCALE

A, B, C and D lie on the circle.

Find

(a) angle ADC ,

Answer(a) Angle $ADC = \dots\dots\dots$ [1]

(b) angle ADB .

Answer(b) Angle $ADB = \dots\dots\dots$ [2]

13 (a) $3^x = \sqrt[4]{3^5}$

Find the value of x .

Answer(a) $x = \dots\dots\dots$ [1]

(b) Simplify $(32y^{15})^{\frac{2}{5}}$.

Answer(b) $\dots\dots\dots$ [2]

14 Write as a single fraction in its simplest form.

$$3 - \frac{t+2}{t-1}$$

Answer [3]

15 Do not use a calculator in this question and show all the steps of your working.

Give each answer as a fraction in its lowest terms.

Work out.

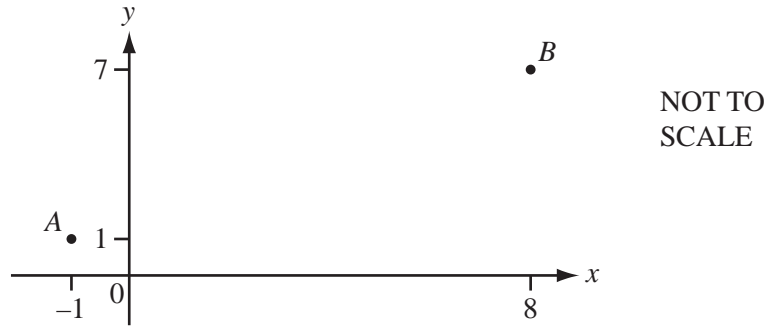
(a) $\frac{3}{4} - \frac{1}{12}$

Answer(a) [2]

(b) $2\frac{1}{2} \times \frac{4}{25}$

Answer(b) [2]

16



A is the point $(-1, 1)$ and B is the point $(8, 7)$.

(a) Write \vec{AB} as a column vector.

$$\text{Answer(a) } \vec{AB} = \begin{pmatrix} \\ \end{pmatrix} \quad [1]$$

(b) Find $|\vec{AB}|$.

$$\text{Answer(b) } |\vec{AB}| = \dots\dots\dots [2]$$

(c) $\vec{AC} = 2\vec{AB}$.

Write down the co-ordinates of C .

$$\text{Answer(c) } (\dots\dots\dots, \dots\dots\dots) \quad [1]$$

17 Factorise completely.

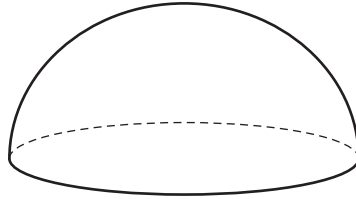
(a) $a + b + at + bt$

$$\text{Answer(a) } \dots\dots\dots [2]$$

(b) $x^2 - 2x - 24$

$$\text{Answer(b) } \dots\dots\dots [2]$$

- 18 The diagram shows a solid hemisphere.



The **total** surface area of this hemisphere is 243π .

The volume of the hemisphere is $k\pi$.

Find the value of k .

[The surface area, A , of a sphere with radius r is $A = 4\pi r^2$.]

[The volume, V , of a sphere with radius r is $V = \frac{4}{3}\pi r^3$.]

Answer $k = \dots\dots\dots$ [4]

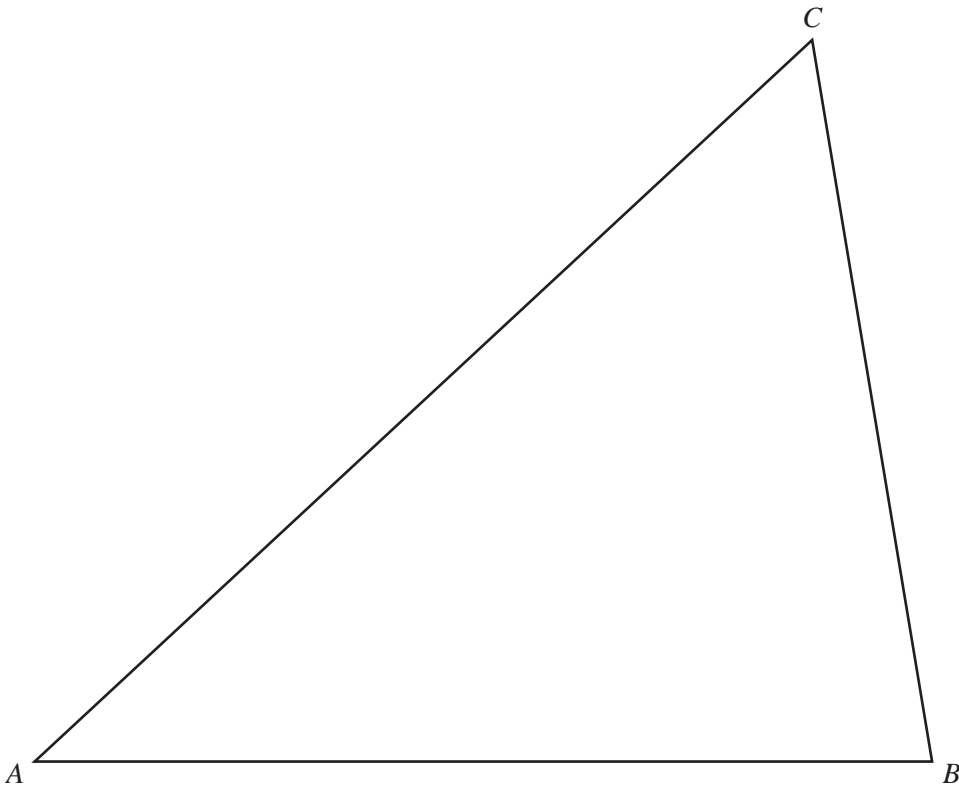
- 19 (a) Convert 144 km/h into metres per second.

Answer(a) $\dots\dots\dots$ m/s [2]

- (b) A train of length 120 m is travelling at 144 km/h.
It passes under a bridge of width 20 m.

Find the time taken for the whole train to pass under the bridge.
Give your answer in seconds.

Answer(b) $\dots\dots\dots$ s [2]



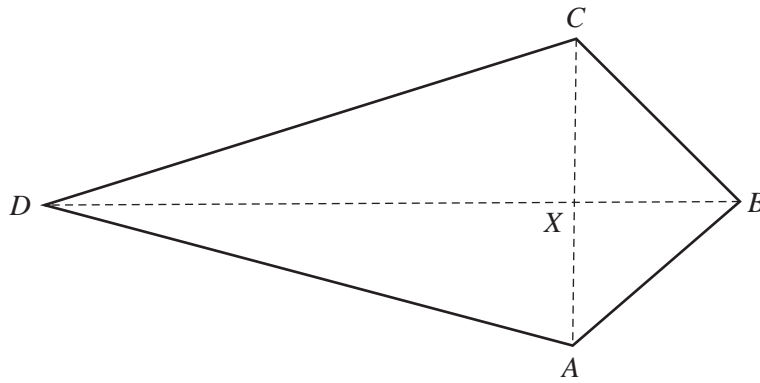
(a) In this part, use a straight edge and compasses only and show your construction arcs.

Construct accurately

(i) the bisector of angle B , [2]

(ii) the locus of points equidistant from B and from C . [2]

(b) Shade the region inside triangle ABC containing the points which are
nearer to BC than to BA **and** nearer to C than to B . [1]

NOT TO
SCALE

$ABCD$ is a kite.

The diagonals AC and BD intersect at X .

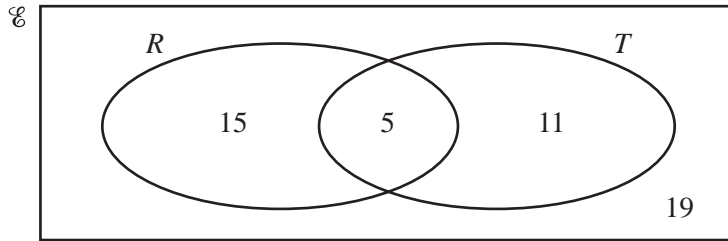
$AC = 12$ cm, $BD = 20$ cm and $DX : XB = 3 : 2$.

(a) Calculate angle ABC .

Answer(a) Angle $ABC = \dots\dots\dots$ [3]

(b) Calculate the area of the kite.

Answer(b) $\dots\dots\dots$ cm² [2]



The Venn diagram shows the number of red cars and the number of two-door cars in a car park. There is a total of 50 cars in the car park. $R = \{\text{red cars}\}$ and $T = \{\text{two-door cars}\}$.

(a) A car is chosen at random.

Write down the probability that

(i) it is red and it is a two-door car,

Answer(a)(i) [1]

(ii) it is not red and it is a two-door car.

Answer(a)(ii) [1]

(b) A two-door car is chosen at random.

Write down the probability that it is not red.

Answer(b) [1]

(c) Two cars are chosen at random.

Find the probability that they are both red.

Answer(c) [2]

(d) On the Venn diagram, shade the region $R \cup T'$. [1]

Permission to reproduce items where third-party owned material protected by copyright is included has been sought and cleared where possible. Every reasonable effort has been made by the publisher (UCLES) to trace copyright holders, but if any items requiring clearance have unwittingly been included the publisher will be pleased to make amends at the earliest possible opportunity.

University of Cambridge International Examinations is part of the Cambridge Assessment Group. Cambridge Assessment is the brand name of University of Cambridge Local Examinations Syndicate (UCLES), which is itself a department of the University of Cambridge.