



UNIVERSITY OF CAMBRIDGE INTERNATIONAL EXAMINATIONS
International General Certificate of Secondary Education

CANDIDATE
NAME

CENTRE
NUMBER

--	--	--	--	--

CANDIDATE
NUMBER

--	--	--	--



CAMBRIDGE INTERNATIONAL MATHEMATICS

0607/02

Paper 2 (Extended)

October/November 2013

45 minutes

Candidates answer on the Question Paper.

Additional Materials: Geometrical Instruments

READ THESE INSTRUCTIONS FIRST

Write your Centre number, candidate number and name on all the work you hand in.

Write in dark blue or black pen.

Do not use staples, paper clips, highlighters, glue or correction fluid.

You may use a pencil for any diagrams or graphs.

DO NOT WRITE IN ANY BARCODES.

Answer **all** the questions.

CALCULATORS MUST NOT BE USED IN THIS PAPER.

All answers should be given in their simplest form.

You must show all the relevant working to gain full marks and you will be given marks for correct methods even if your answer is incorrect.

The number of marks is given in brackets [] at the end of each question or part question.

The total number of marks for this paper is 40.

This document consists of **8** printed pages.



Formula List

For the equation $ax^2 + bx + c = 0$ $x = \frac{-b \pm \sqrt{b^2 - 4ac}}{2a}$

Curved surface area, A , of cylinder of radius r , height h . $A = 2\pi rh$

Curved surface area, A , of cone of radius r , sloping edge l . $A = \pi rl$

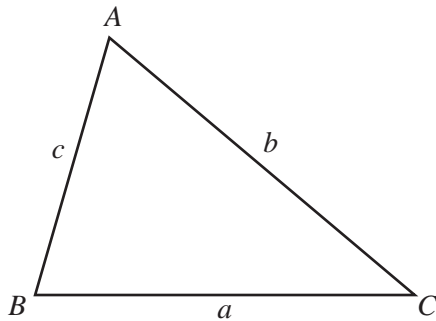
Curved surface area, A , of sphere of radius r . $A = 4\pi r^2$

Volume, V , of pyramid, base area A , height h . $V = \frac{1}{3}Ah$

Volume, V , of cylinder of radius r , height h . $V = \pi r^2 h$

Volume, V , of cone of radius r , height h . $V = \frac{1}{3}\pi r^2 h$

Volume, V , of sphere of radius r . $V = \frac{4}{3}\pi r^3$



$$\frac{a}{\sin A} = \frac{b}{\sin B} = \frac{c}{\sin C}$$

$$a^2 = b^2 + c^2 - 2bc \cos A$$

$$\text{Area} = \frac{1}{2}bc \sin A$$

Answer **all** the questions.

For
Examiner's
Use

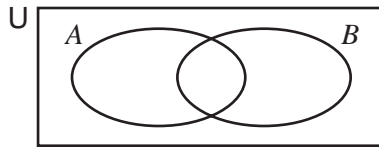
1 Solve the simultaneous equations.

$$\begin{aligned} 3g - 2h &= 11 \\ g - 2h &= 5 \end{aligned}$$

Answer $g =$

$h =$ [2]

2 (a)

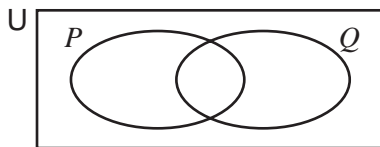


$n(U) = 20, n(A \cup B)' = 3, n(A) = 11, n(B) = 13.$

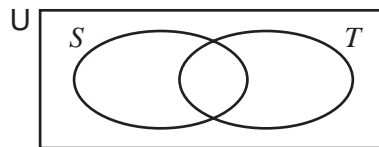
Find $n(A \cap B')$.

Answer(a) [2]

(b) On each Venn diagram, shade the region indicated.



$(P \cap Q)'$



$S \cup T'$

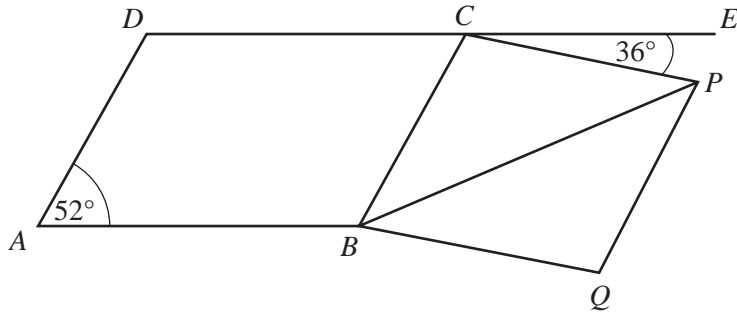
[2]

3 Tiago buys a concert ticket and then sells it for \$15.
He makes a profit of 20%.

Calculate how much Tiago paid for the ticket.

Answer \$ [3]

4

NOT TO
SCALEFor
Examiner's
Use

$ABCD$ is a parallelogram and $BQPC$ is a rhombus.

DCE is a straight line.

Angle $DAB = 52^\circ$ and angle $ECP = 36^\circ$.

Find the size of angle BPC .

Answer [3]

5 (a) Simplify $\sqrt{72}$.

Answer(a) [1]

(b) $\frac{\sqrt{2}+2}{\sqrt{2}-1} = p+q\sqrt{2}$

Find the values of p and q .

Answer(b) $p =$
 $q =$ [3]

6 Simplify the following.

(a) $2y^2 \times 3y^3$

Answer(a) [2]

(b) $\sqrt[3]{27p^{27}}$

Answer(b) [2]

7 (a) Find the amplitude and period of the function $f(x) = 4\cos(4x)$.

Answer(a) Amplitude =

Period = [2]

(b) $g(x) = 4\cos(4x) - 4$

Describe fully the **single** transformation that maps the graph of $y = f(x)$ onto the graph of $y = g(x)$.

Answer(b)

..... [2]

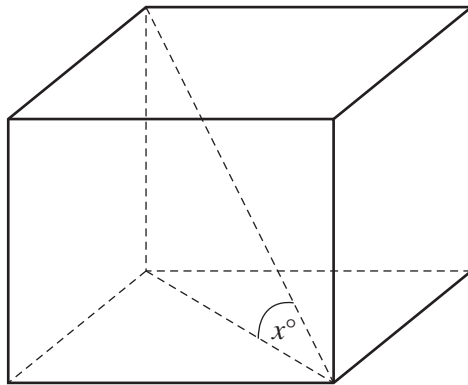
- 8 (a) Write down the value of $8^{\frac{1}{3}}$.

Answer(a) [1]

- (b) Find the exact value of $\left(\frac{4}{3}\right)^{-2}$.

Answer(b) [2]

9



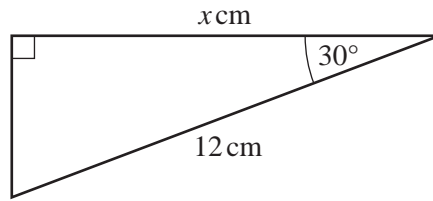
NOT TO
SCALE

The diagram shows a cube of side length 1.

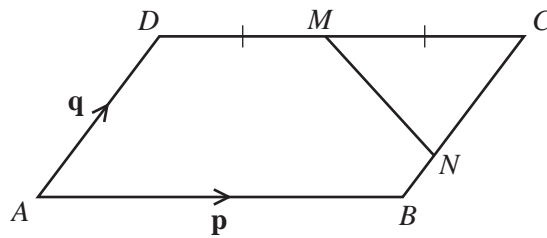
Find the value of $\tan x^\circ$.

Answer [3]

10

NOT TO
SCALEFind the exact value of x .Answer $x =$ [3]

11

NOT TO
SCALE

$ABCD$ is a parallelogram.
 $DM = MC$ and $CN = 2NB$.
 $\vec{AB} = \mathbf{p}$ and $\vec{AD} = \mathbf{q}$.

(a) Write down \vec{CN} in terms of \mathbf{q} .

Answer(a) [1]

(b) Find \vec{MN} in terms of \mathbf{p} and \mathbf{q} .

Answer(b) [1]

Question 12 is printed on the next page.

12 $f(x) = 3x - 1$

$g(x) = 12 - x$

For
Examiner's
Use

Find

(a) $f(g(8))$,

Answer(a) [2]

(b) $f(g(x))$, in its simplest form,

Answer(b) [2]

(c) $g^{-1}(x)$.

Answer(c) $g^{-1}(x) =$ [1]

Permission to reproduce items where third-party owned material protected by copyright is included has been sought and cleared where possible. Every reasonable effort has been made by the publisher (UCLES) to trace copyright holders, but if any items requiring clearance have unwittingly been included, the publisher will be pleased to make amends at the earliest possible opportunity.

University of Cambridge International Examinations is part of the Cambridge Assessment Group. Cambridge Assessment is the brand name of University of Cambridge Local Examinations Syndicate (UCLES), which is itself a department of the University of Cambridge.