



UNIVERSITY OF CAMBRIDGE INTERNATIONAL EXAMINATIONS  
International General Certificate of Secondary Education

CANDIDATE  
NAME

CENTRE  
NUMBER

--	--	--	--	--

CANDIDATE  
NUMBER

--	--	--	--

\* 2 8 5 9 1 2 5 5 4 7 \*

**CAMBRIDGE INTERNATIONAL MATHEMATICS**

**0607/01**

Paper 1 (Core)

**October/November 2013**

**45 minutes**

Candidates answer on the Question Paper

Additional Materials: Geometrical Instruments

**READ THESE INSTRUCTIONS FIRST**

Write your Centre number, candidate number and name on all the work you hand in.

Write in dark blue or black pen.

Do not use staples, paper clips, highlighters, glue or correction fluid.

You may use a pencil for any diagrams or graphs.

**DO NOT WRITE IN ANY BARCODES.**

Answer **all** the questions.

**CALCULATORS MUST NOT BE USED IN THIS PAPER.**

All answers should be given in their simplest form.

You must show all the relevant working to gain full marks and you will be given marks for correct methods even if your answer is incorrect.

The number of marks is given in brackets [ ] at the end of each question or part question.

The total number of marks for this paper is 40.

This document consists of **11** printed pages and **1** blank page.



**Formula List**

Area,  $A$ , of triangle, base  $b$ , height  $h$ .  $A = \frac{1}{2}bh$

Area,  $A$ , of circle, radius  $r$ .  $A = \pi r^2$

Circumference,  $C$ , of circle, radius  $r$ .  $C = 2\pi r$

Curved surface area,  $A$ , of cylinder of radius  $r$ , height  $h$ .  $A = 2\pi rh$

Curved surface area,  $A$ , of cone of radius  $r$ , sloping edge  $l$ .  $A = \pi rl$

Curved surface area,  $A$ , of sphere of radius  $r$ .  $A = 4\pi r^2$

Volume,  $V$ , of prism, cross-sectional area  $A$ , length  $l$ .  $V = Al$

Volume,  $V$ , of pyramid, base area  $A$ , height  $h$ .  $V = \frac{1}{3}Ah$

Volume,  $V$ , of cylinder of radius  $r$ , height  $h$ .  $V = \pi r^2 h$

Volume,  $V$ , of cone of radius  $r$ , height  $h$ .  $V = \frac{1}{3}\pi r^2 h$

Volume,  $V$ , of sphere of radius  $r$ .  $V = \frac{4}{3}\pi r^3$

1 Write 8572

(a) correct to the nearest 10 ,

Answer (a) ..... [1]

(b) correct to the nearest 100 .

Answer (b) ..... [1]

2 Put one of + − × ÷ in the box to make the following correct.

$$3 \times (11 \square 5) = 18 \quad [1]$$

3 Write the following in order, starting with the smallest.

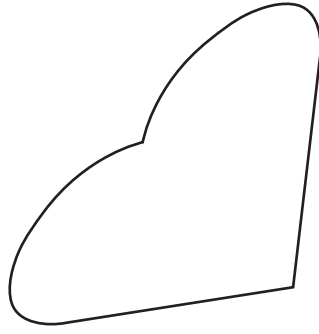
$2^5$

$5^2$

$3^3$

Answer ..... < ..... < ..... [2]

4

For  
Examiner's  
Use

On the shape draw the line of symmetry.

[1]

- 5 (a) Work out  $\frac{3}{4}$  of \$120 .

Answer (a) \$ .....

[1]

- (b) A sum of money is divided between Stefan and Tomas in the ratio

$$\text{Stefan : Tomas} = 1 : 3.$$

- (i) What **fraction** of the money does Stefan receive?

Answer (b)(i) .....

[1]

- (ii) What **percentage** of the money does Tomas receive?

Answer (b)(ii) ..... %

[1]

- 6 (a) Jean plays golf. Here are her best 10 scores.

69 71 68 70 71 66 71 72 69 70

- (i) What is the range of her scores?

*Answer (a)(i)* ..... [1]

- (ii) Find Jean's modal score.

*Answer (a)(ii)* ..... [1]

- (b) Anya records the shoe size of 10 of her friends.  
This frequency table shows her results.

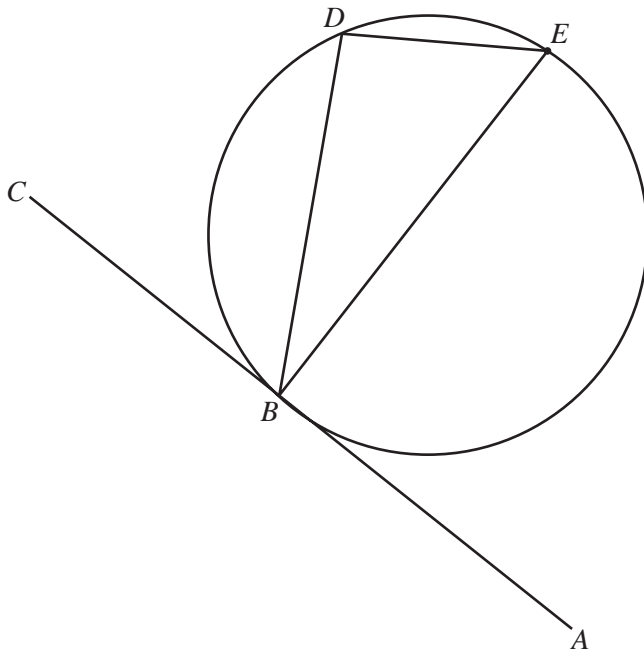
Shoe size	Frequency
3	4
4	2
5	3
6	1

Find the mean shoe size.

*Answer (b)* ..... [3]

For  
Examiner's  
Use

- 7 In the diagram  $BE$  is the diameter of the circle and  $AC$  is a tangent to the circle at  $B$ .



NOT TO  
SCALE

For  
Examiner's  
Use

- (a) Write down the size of angle  $BDE$ .

Answer (a) ..... [1]

- (b) Write down the size of angle  $CBE$ .

Answer (b) ..... [1]

- (c) Which word is the mathematical name for the line  $DE$ ?

diameter

radius

sector

chord

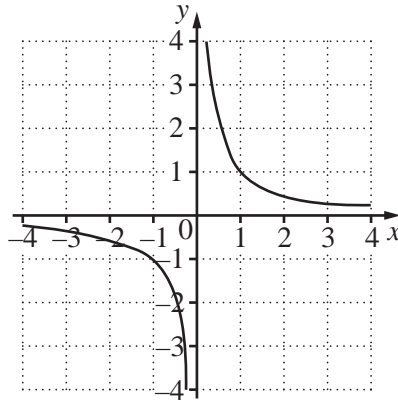
circumference

centre

Answer (c) ..... [1]

- 8 (a) The diagram shows the graph of  $y = \frac{1}{x}$ .

For  
Examiner's  
Use



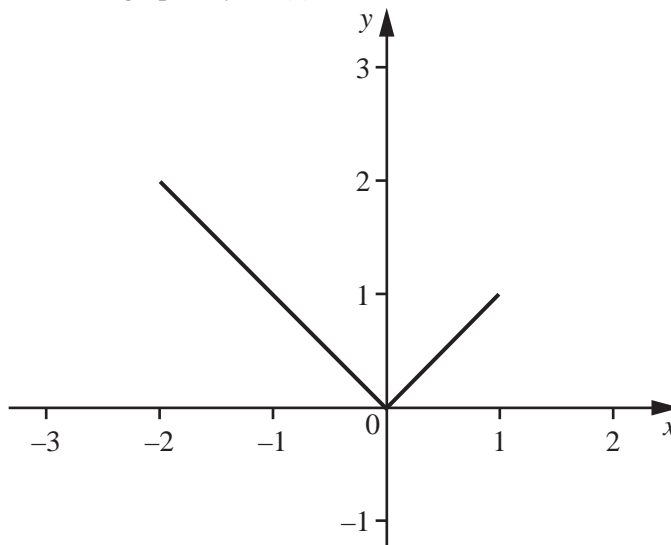
Write down the equations of the two asymptotes of the graph of  $y = \frac{1}{x}$ .

Answer (a) .....

.....

[2]

- (b) The diagram shows the graph of  $y = f(x)$ .



- (i) Write down the domain.

Answer (b)(i) ..... [1]

- (ii) Write down the range.

Answer (b)(ii) ..... [1]

- (iii) On the diagram, sketch the graph of  $y = f(x) + 1$ .

[1]

9 Jimmi's pencil case only contains 3 pens and 12 pencils.

(a) He chooses an object at random from his pencil case.

Find the probability that the object is a pencil.

*Answer (a)* ..... [1]

(b) Jimmi chooses an object at random from his pencil case and then replaces it.  
He repeats this 100 times.

How many times do you expect Jimmi to choose a **pen**?

*Answer (b)* ..... [2]

---

For  
Examiner's  
Use



10 (a) Solve the following equations.

(i)  $6 + 5w = 41$

Answer (a)(i)  $w =$  ..... [2]

(ii)  $7(3x - 4) = 35$

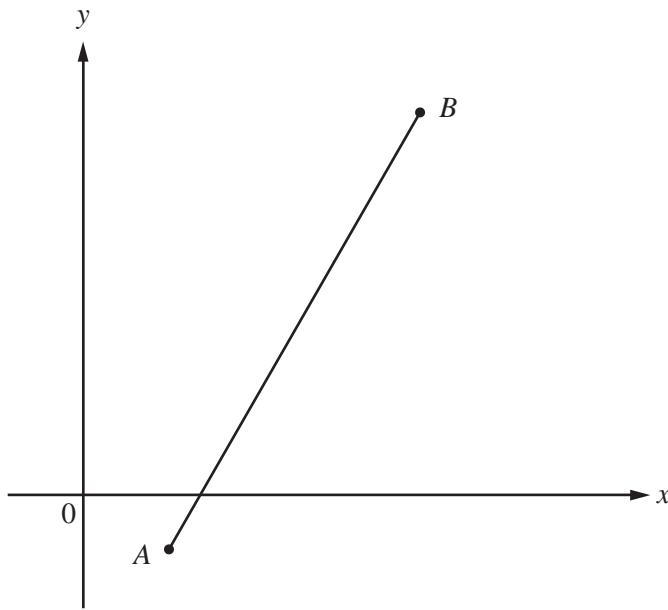
Answer (a)(ii)  $x =$  ..... [3]

(b) Write down **two** integers which satisfy the inequality  $4a - 1 < 10$ .

Answer (b) ..... [2]

---

- 11  $A$  is the point  $(2, -1)$  and  $B$  is the point  $(4, 5)$ .



NOT TO  
SCALE

For  
Examiner's  
Use

- (a) Find the co-ordinates of the midpoint of  $AB$ .

Answer (a) ( ..... , ..... ) [1]

- (b) (i) Find the gradient of  $AB$ .

Answer (b)(i) ..... [2]

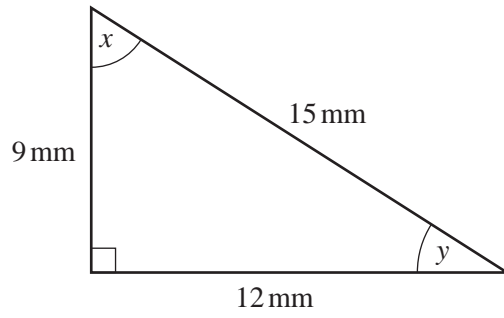
- (ii) Find the equation of the line  $AB$ .

Answer (b)(ii) ..... [2]

- (c) Write down the equation of a line parallel to  $AB$ .

Answer (c) ..... [1]

12

NOT TO  
SCALEFor  
Examiner's  
Use

Write down

(a)  $\tan x$ ,

Answer (a) ..... [1]

(b)  $\cos y$ .

Answer (b) ..... [1]

**BLANK PAGE**

---

Permission to reproduce items where third-party owned material protected by copyright is included has been sought and cleared where possible. Every reasonable effort has been made by the publisher (UCLES) to trace copyright holders, but if any items requiring clearance have unwittingly been included, the publisher will be pleased to make amends at the earliest possible opportunity.

University of Cambridge International Examinations is part of the Cambridge Assessment Group. Cambridge Assessment is the brand name of University of Cambridge Local Examinations Syndicate (UCLES), which is itself a department of the University of Cambridge.