



UNIVERSITY OF CAMBRIDGE INTERNATIONAL EXAMINATIONS  
International General Certificate of Secondary Education

CANDIDATE  
NAME

CENTRE  
NUMBER

--	--	--	--	--

CANDIDATE  
NUMBER

--	--	--	--	--

**CAMBRIDGE INTERNATIONAL MATHEMATICS**

**0607/22**

Paper 2 (Extended)

**May/June 2013**

**45 minutes**

Candidates answer on the Question Paper.

Additional Materials: Geometrical Instruments

**READ THESE INSTRUCTIONS FIRST**

Write your Centre number, candidate number and name on all the work you hand in.

Write in dark blue or black pen.

Do not use staples, paper clips, highlighters, glue or correction fluid.

You may use a pencil for any diagrams or graphs.

**DO NOT WRITE IN ANY BARCODES.**

Answer **all** the questions.

**CALCULATORS MUST NOT BE USED IN THIS PAPER.**

All answers should be given in their simplest form.

You must show all the relevant working to gain full marks and you will be given marks for correct methods even if your answer is incorrect.

The number of marks is given in brackets [ ] at the end of each question or part question.

The total number of marks for this paper is 40.

This document consists of **8** printed pages.



## Formula List

For the equation  $ax^2 + bx + c = 0$   $x = \frac{-b \pm \sqrt{b^2 - 4ac}}{2a}$

Curved surface area,  $A$ , of cylinder of radius  $r$ , height  $h$ .  $A = 2\pi rh$

Curved surface area,  $A$ , of cone of radius  $r$ , sloping edge  $l$ .  $A = \pi rl$

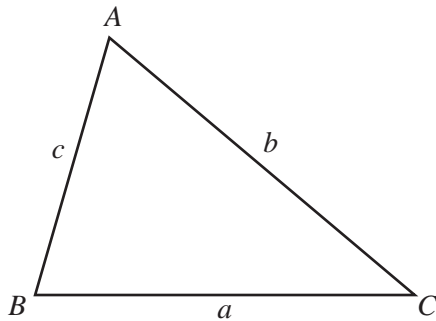
Curved surface area,  $A$ , of sphere of radius  $r$ .  $A = 4\pi r^2$

Volume,  $V$ , of pyramid, base area  $A$ , height  $h$ .  $V = \frac{1}{3}Ah$

Volume,  $V$ , of cylinder of radius  $r$ , height  $h$ .  $V = \pi r^2 h$

Volume,  $V$ , of cone of radius  $r$ , height  $h$ .  $V = \frac{1}{3}\pi r^2 h$

Volume,  $V$ , of sphere of radius  $r$ .  $V = \frac{4}{3}\pi r^3$



$$\frac{a}{\sin A} = \frac{b}{\sin B} = \frac{c}{\sin C}$$

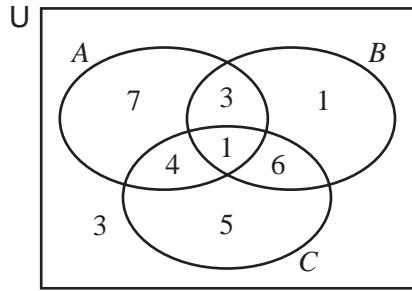
$$a^2 = b^2 + c^2 - 2bc \cos A$$

$$\text{Area} = \frac{1}{2}bc \sin A$$

Answer **all** the questions.

For  
Examiner's  
Use

1



The Venn diagram shows the **number of elements** in each of the sets  $A$ ,  $B$  and  $C$ , and  $n(U) = 30$ .

(a) Find

(i)  $n(A)$ ,

Answer(a)(i) ..... [1]

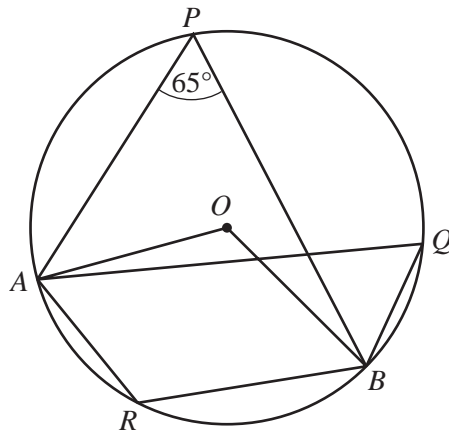
(ii)  $n(C \cup B')$ .

Answer(a)(ii) ..... [1]

(b) Shade the region  $(A \cap B) \cup C$  on the Venn diagram.

[1]

2



NOT TO  
SCALE

$A$ ,  $P$ ,  $Q$ ,  $B$  and  $R$  lie on a circle, centre  $O$ .  
Angle  $APB = 65^\circ$ .

Find

(a) angle  $AQB$ ,

Answer(a) Angle  $AQB =$  ..... [1]

(b) angle  $AOB$ ,

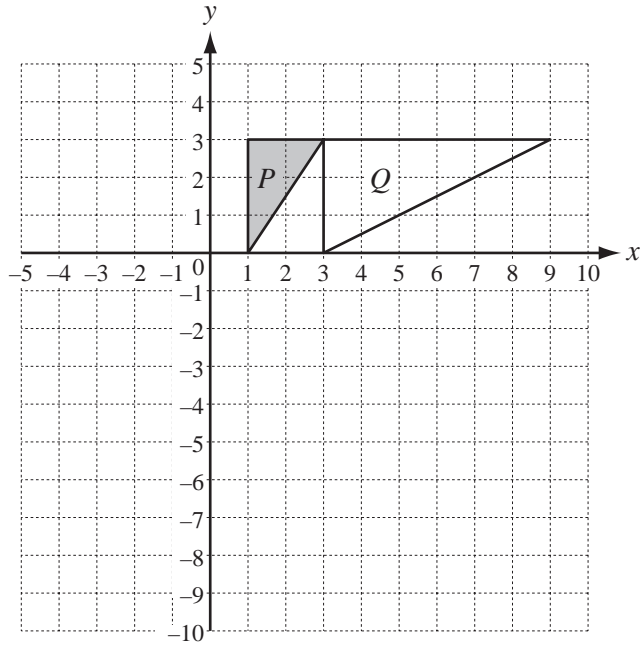
Answer(b) Angle  $AOB =$  ..... [1]

(c) angle  $ARB$ .

Answer(c) Angle  $ARB =$  ..... [1]

3

For  
Examiner's  
Use



(a) Enlarge shape *P* using centre (3, 4) and scale factor 3. [2]

(b) Describe fully the **single** transformation that maps shape *P* onto shape *Q*.

.....  
..... [3]

4 (a) Simplify.  
 $16x^{16} \div 2x^2$

Answer(a) ..... [2]

(b)  $8^n = \frac{1}{2}$

Find the value of *n*.

Answer(b) *n* = ..... [2]

5 Rationalise the denominator in each of the following.

(a)  $\frac{2}{\sqrt{3}}$

Answer(a) ..... [1]

(b)  $\frac{1}{\sqrt{3}-1}$

Answer(b) ..... [2]

---

6 (a) Find the value of  $ax^3$  when  $a = 1200$  and  $x = 5$ .  
Give your answer in standard form.

Answer(a) ..... [2]

(b) Make  $x$  the subject of the formula  $y = ax^3$ .

Answer(b)  $x =$  ..... [2]

---

For  
Examiner's  
Use

- 7 (a) Write  $2\log(x + 1) - \log(x - 1)$  as a single logarithm.

For  
Examiner's  
Use

Answer(a) ..... [2]

- (b)  $\log_3 p = 4$  where  $p$  is an integer.

Find the value of  $p$ .

Answer(b)  $p =$  ..... [2]

- 8 These are the first five terms of a sequence.

2                  6                  12                  20                  30

- (a) Find the next term.

Answer(a) ..... [1]

- (b) Find an expression for the  $n$ th term.

Answer(b) ..... [3]

9  $f(x) = 3 + 2x$

Find

(a)  $f(f(-4))$ ,

Answer(a) ..... [2]

(b)  $f^{-1}(x)$ .

Answer(b) ..... [2]

---

10  $y$  varies inversely as  $x^2$ .  
When  $x = 2, y = 24$ .

Find a formula for  $y$  in terms of  $x$ .

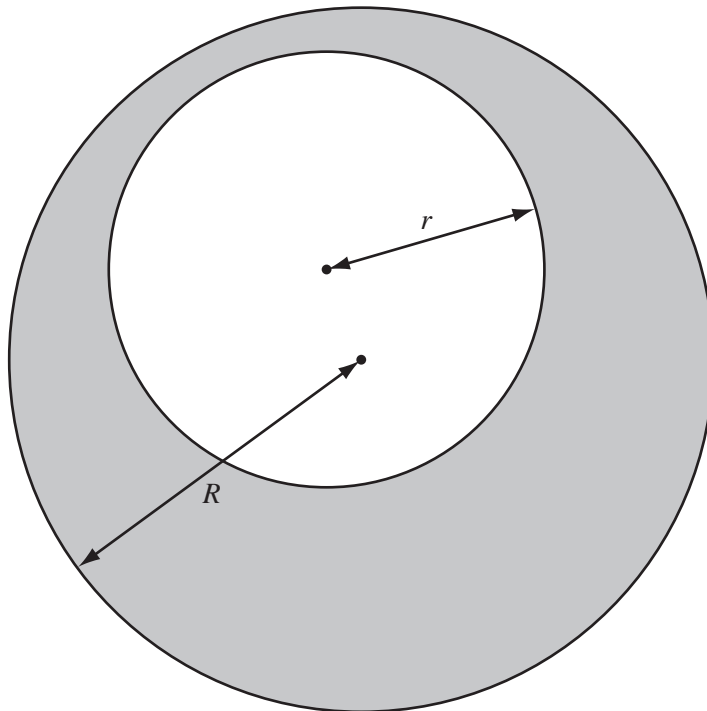
Answer  $y =$  ..... [2]

---

Question 11 is printed on the next page.

For  
Examiner's  
Use

11

For  
Examiner's  
UseNOT TO  
SCALE

The diagram shows a circle of radius  $r$  inside a circle of radius  $R$ .

- (a) Find an expression, in terms of  $\pi$ ,  $r$  and  $R$ , for the shaded area.  
Factorise your expression completely.

Answer(a) ..... [2]

- (b) When  $R = r + 3$ , the shaded area is  $24\pi$ .

Find the value of  $r$ .

Answer(b)  $r =$  ..... [2]

Permission to reproduce items where third-party owned material protected by copyright is included has been sought and cleared where possible. Every reasonable effort has been made by the publisher (UCLES) to trace copyright holders, but if any items requiring clearance have unwittingly been included, the publisher will be pleased to make amends at the earliest possible opportunity.

University of Cambridge International Examinations is part of the Cambridge Assessment Group. Cambridge Assessment is the brand name of University of Cambridge Local Examinations Syndicate (UCLES), which is itself a department of the University of Cambridge.