



1 (a) Write twenty five million in figures.

Answer(a) ..... [1]

For  
Examiner's  
Use

(b) Write the following in order of size, starting with the smallest.

$\frac{2}{3}$       65%      0.6

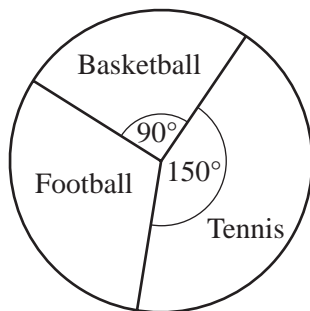
Answer(b) ..... < ..... < ..... [1]

(c) In a sale a coat costing \$250 is reduced to \$200.

Find the percentage decrease in the cost.

Answer(c) ..... % [3]

(d)



NOT TO  
SCALE

120 students are asked to choose their favourite sport.  
The results are shown in the pie chart.

Calculate the number of students who chose

(i) basketball,

Answer(d)(i) ..... [1]

(ii) football.

Answer(d)(ii) ..... [2]

2 The distance between Geneva and Gstaad is 150 km.

(a) Write 150 in standard form.

Answer(a) ..... [1]

(b) A car took  $1\frac{1}{2}$  hours to travel from Geneva to Gstaad.

Calculate the average speed of the car.

Answer(b) ..... km/h [1]

(c) A bus left Gstaad at 10 15.  
It arrived in Geneva at 12 30.

Calculate the time, in hours and minutes, that the bus took for the journey.

Answer(c) ..... h ..... min [1]

(d) Another bus left Geneva at 13 55.  
It travelled at an average speed of 60 km/h.

Find the time it arrived in Gstaad.

Answer(d) ..... [2]

(e) The distance of 150 km is correct to the nearest 10 km.

Complete the statement for the distance,  $d$  km, from Geneva to Gstaad.

Answer(e) .....  $\leq d <$  ..... [2]

For  
Examiner's  
Use

3                                    36      29            41      45            15      10            13

For  
Examiner's  
Use

Use the numbers in the list above to answer all the following questions.

(a) Write down

(i) two even numbers,

Answer(a)(i) ..... , ..... [1]

(ii) two prime numbers,

Answer(a)(ii) ..... , ..... [2]

(iii) a square number,

Answer(a)(iii) ..... [1]

(iv) two factors of 90.

Answer(a)(iv) ..... , ..... [2]

(b) (i) Calculate the mean of the seven numbers.

Answer(b)(i) ..... [2]

(ii) Find the median.

Answer(b)(ii) ..... [2]

(iii) Find the range.

Answer(b)(iii) ..... [1]

(c) A number from the list is chosen at random.

Find the probability that the number is

(i) even,

*Answer(c)(i)* ..... [1]

(ii) a multiple of 5.

*Answer(c)(ii)* ..... [1]

---

*For  
Examiner's  
Use*

## 4 (a) Using the exchange rates

$$\$1 = 0.70 \text{ Euros and } \$1 = 90 \text{ Yen}$$

change

(i) \$100 to Euros,

*Answer(a)(i)* ..... Euros [1]

(ii) 100 Yen to dollars.

*Answer(a)(ii)* \$ ..... [2]

(b) Tania went on holiday to Switzerland.  
The exchange rate was  $\$1 = 1.04$  Swiss francs (CHF).  
She changed \$1500 to Swiss francs and paid 1% commission.

(i) How much commission, in dollars, did she pay?

*Answer(b)(i)* \$ ..... [1]

(ii) Show that she received CHF 1544.40.

*Answer (b)(ii)*

[2]

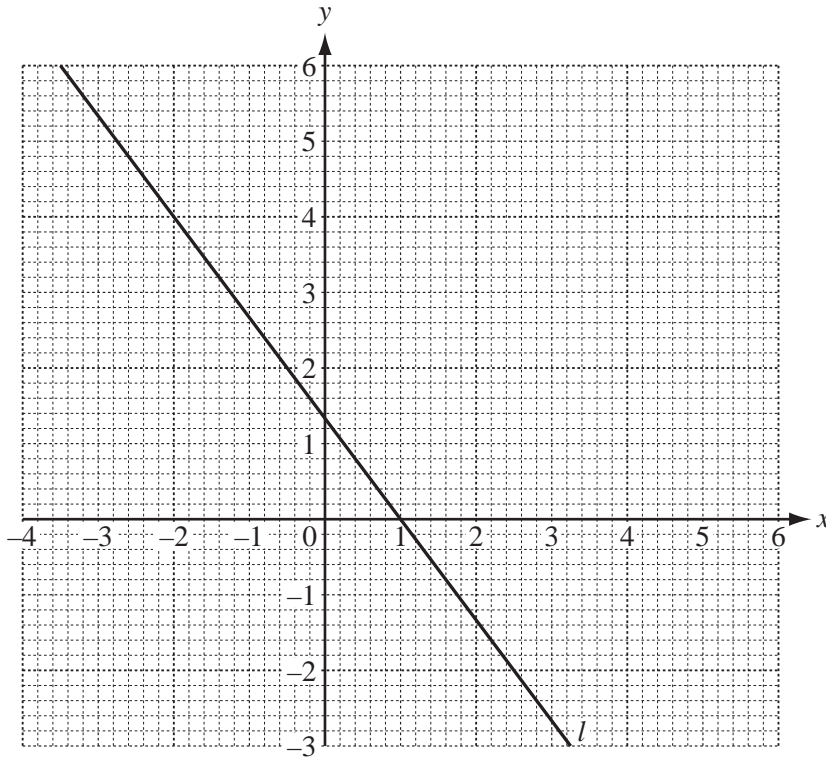
(c) Tania spent CHF 950 on her holiday.  
She converted the remaining Swiss francs back into dollars.  
She paid CHF 10 to make the exchange.

Calculate the amount, in dollars, Tania received.

*Answer(c)* \$ ..... [3]

5

For  
Examiner's  
Use



(a) Find the gradient of the line  $l$ .

Answer(a) ..... [2]

(b) (i) Complete the table below for  $x + 2y = 6$ .

$x$	0	2	
$y$			0

[3]

(ii) On the grid, draw the line  $x + 2y = 6$  for  $-4 \leq x \leq 6$ . [2]


(c) The equation of the line  $l$  is  $4x + 3y = 4$ .

Use your diagram to solve the simultaneous equations  $4x + 3y = 4$  and  $x + 2y = 6$ .

Answer(c)  $x =$  .....

$y =$  ..... [2]

6 (a)



The line  $AB$  is drawn above.

**Parts (i), (iii), and (v) must be completed using a ruler and compasses only.  
All construction arcs must be clearly shown.**

(i) Construct triangle  $ABC$  with  $AC = 7$  cm and  $BC = 6$  cm. [2]

(ii) Measure angle  $BAC$ .

*Answer(a)(ii)* Angle  $BAC =$  ..... [1]

(iii) Construct the bisector of angle  $ABC$ . [2]

(iv) The bisector of angle  $ABC$  meets  $AC$  at  $T$ .

Measure the length of  $AT$ .

*Answer(a)(iv)*  $AT =$  ..... cm [1]

(v) Construct the perpendicular bisector of the line  $BC$ . [2]

(vi) Shade the region that is

- and**
- nearer to  $B$  than to  $C$
  - nearer to  $BC$  than to  $AB$ . [1]



(b) A ship sails 40 km on a bearing of  $040^\circ$  from  $P$  to  $Q$ .

For  
Examiner's  
Use

- (i) Using a scale of 1 centimetre to represent 5 kilometres, make a scale drawing of the path of the ship.

Mark the point  $Q$ .



Scale: 1 cm = 5 km

[2]

- (ii) At  $Q$  the ship changes direction and sails 30 km on a bearing of  $160^\circ$  to the point  $R$ .

Draw the path of the ship.

[2]

- (iii) Find how far, in kilometres, the ship is from the starting position  $P$ .

Answer(b)(iii) ..... km [1]

- (iv) Measure the bearing of  $P$  from  $R$ .

Answer(b)(iv) ..... [1]

7 (a) Solve the equation  $2(x + 4) = 3(x + 2) + 8$ .

For  
Examiner's  
Use

Answer(a)  $x =$  ..... [3]

(b) Make  $z$  the subject of  $za + b = 3$ .

Answer(b)  $z =$  ..... [2]

(c) Find  $x$  when  $2x^3 = 54$ .

Answer(c)  $x =$  ..... [2]

- (d) A rectangular field has a length of  $x$  metres.  
The width of the field is  $(2x - 5)$  metres.

- (i) Show that the perimeter of the field is  $(6x - 10)$  metres.

*Answer (d)(i)*

[2]

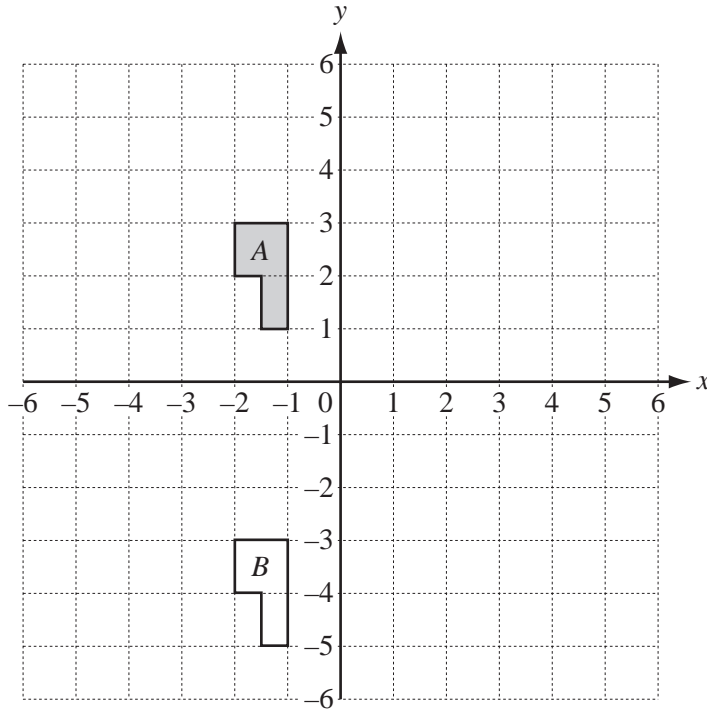
- (ii) The perimeter of the field is 50 metres.

Find the length of the field.

*Answer(d)(ii) length =* ..... m [2]

---

*For  
Examiner's  
Use*



The diagram shows two shapes *A* and *B*.

- (a) Describe fully the **single** transformation which maps *A* onto *B*.

Answer(a) ..... [2]

- (b) On the grid, draw the line  $x = 2$ . [1]

- (c) On the grid, draw the image of shape *A* after the following transformations.

- (i) Reflection in the line  $x = 2$ . Label the image *C*. [1]

- (ii) Enlargement, scale factor 2, centre  $(0, 0)$ . Label the image *D*. [2]

- 9 (a) Factorise completely  $3x^2 + 12x$ .

Answer(a) ..... [2]

- (b) Find the value of  $a^3 + 3b^2$  when  $a = 2$  and  $b = -2$ .

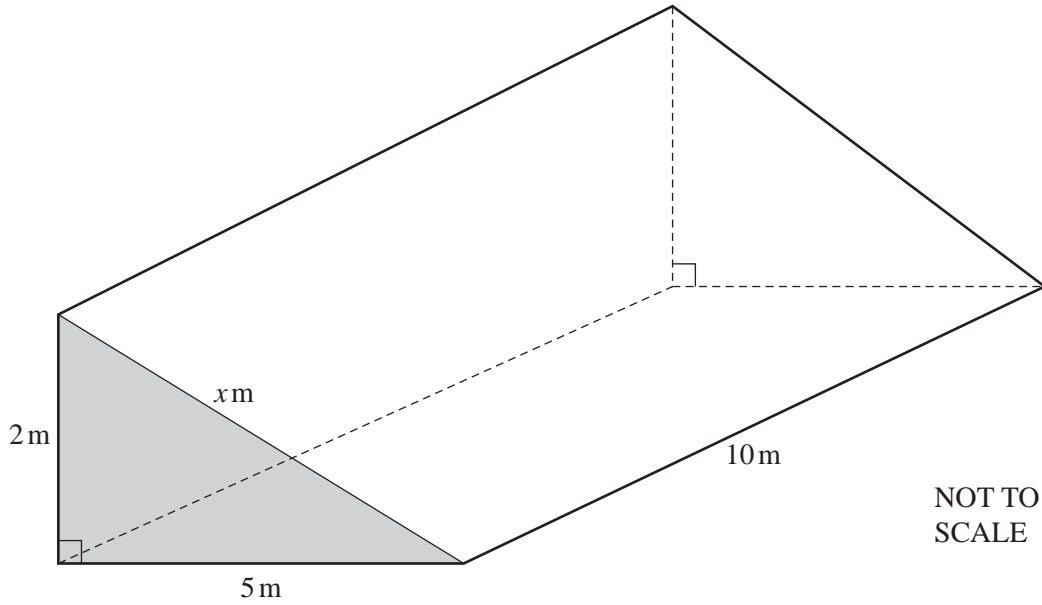
Answer(b) ..... [2]

- (c) Simplify  $3x^4 \times 2x^3$ .

Answer(c) ..... [2]

---

For  
Examiner's  
Use



The diagram shows a ramp in the form of a triangular prism.  
The cross-section is a right-angled triangle of length 5 m and height 2 m.

- (a) Find the value of  $x$ .  
Give your answer correct to 1 decimal place.

Answer(a)  $x =$  ..... [3]

- (b) Find the area of the cross-section.

Answer(b) .....  $\text{m}^2$  [2]

- (c) The ramp is 10 m long.  
Calculate the volume of the ramp.

Answer(c) .....  $\text{m}^3$  [1]

(d) Calculate the total surface area of all five faces of the ramp.

For  
Examiner's  
Use

Answer(d) ..... m<sup>2</sup> [3]

(e) Each face of the ramp is painted.  
Paint costs \$2.25 per square metre.

Calculate the total cost of the paint.

Answer(e) \$ ..... [1]

---

Question 11 is printed on the next page.

11

For  
Examiner's  
Use

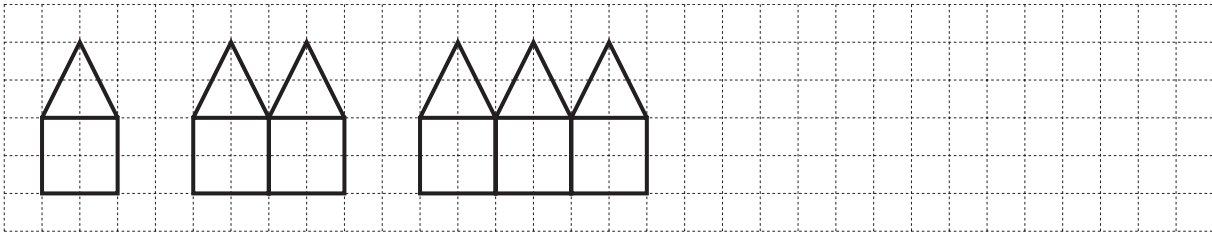


Diagram 1

Diagram 2

Diagram 3

The diagrams show a sequence of shapes.

(a) On the grid, draw Diagram 4. [1]

(b) Complete the table showing the number of lines in each diagram.

Diagram ( $n$ )	Number of lines
1	6
2	11
3	
4	
5	

[3]

(c) Work out the number of lines in Diagram 8.

Answer(c) ..... [1]

(d) Write down an expression, in terms of  $n$ , for the number of lines in Diagram  $n$ .

Answer(d) ..... [2]

(e) Work out the number of lines in Diagram 100.

Answer(e) ..... [1]

(f) The number of lines in Diagram  $p$  is 66.

Find the value of  $p$ .

Answer(f)  $p =$  ..... [2]

Permission to reproduce items where third-party owned material protected by copyright is included has been sought and cleared where possible. Every reasonable effort has been made by the publisher (UCLES) to trace copyright holders, but if any items requiring clearance have unwittingly been included, the publisher will be pleased to make amends at the earliest possible opportunity.

University of Cambridge International Examinations is part of the Cambridge Assessment Group. Cambridge Assessment is the brand name of University of Cambridge Local Examinations Syndicate (UCLES), which is itself a department of the University of Cambridge.