



UNIVERSITY OF CAMBRIDGE INTERNATIONAL EXAMINATIONS
General Certificate of Education Advanced Subsidiary Level

CANDIDATE
NAME

CENTRE
NUMBER

--	--	--	--	--

CANDIDATE
NUMBER

--	--	--	--



PHYSICAL SCIENCE

8780/02

Paper 2 Short Response

October/November 2011

40 minutes

Candidates answer on the Question Paper.

Additional Materials: Data Booklet

READ THESE INSTRUCTIONS FIRST

Write your Centre number, candidate number and name on all the work you hand in.

Write in dark blue or black pen.

You may use a pencil for any diagrams or graphs.

Do not use staples, paper clips, highlighters, glue or correction fluid.

DO NOT WRITE IN ANY BARCODES.

Answer **all** questions.

You may lose marks if you do not show your working or if you do not use appropriate units.

A Data Booklet is provided.

At the end of the examination, fasten all your work securely together.

The number of marks is given in brackets [] at the end of each question or part question.

For Examiner's Use

1	
2	
3	
4	
5	
6	
7	
8	
9	
10	
11	
12	
13	
14	
Total	

This document consists of **8** printed pages.



Answer **all** the questions in the spaces provided.

Relevant Data, Formulae and the Periodic Table are provided in the Data Booklet.

For
Examiner's
Use

- 1 At a school sports day, a runner's time for one lap of an 800 m race is measured using a hand-held stopwatch.

Estimate the uncertainty in the measurement of the time.

uncertainty = ± s [1]

- 2 An unloaded van is travelling along a straight, level road when a dog runs into the road. The driver fully applies his brakes and comes to rest after travelling a further 20 m.

If the van had been fully loaded, state whether it would have stopped in the same, a greater or a smaller distance.

.....

Explain your answer.

.....
.....
..... [2]

- 3 Explain why the weight of an object on the Earth's surface is different from its weight on the Moon's surface.

.....
.....
..... [2]

- 4 Define the term *relative atomic mass*.

.....
.....
..... [2]

- 5 The two isotopes ^{12}C and ^{13}C are found in a sample of carbon.
State **one** difference and **two** similarities in the atomic structure of the two isotopes.

difference

.....

similarities

1.

 2.

[2]

- 6 Table 6.1 gives the relative abundance of each isotope in a mass spectrum of a sample of germanium, Ge.

Table 6.1

m/e	70	72	74
relative abundance (%)	24.4	32.4	43.2

- (a) Complete the electron arrangement of a Ge atom.

$1s^2$ [1]

- (b) Use the data in Table 6.1 to calculate the relative atomic mass of this sample of germanium.
Give your answer to **one** decimal place.

A_r of Ge = [2]

7 In general, the first ionisation energies of the elements increase across Period 3. Explain this trend.

.....
.....
.....
..... [2]

8 There is a potential difference of 12 volts between two points. Explain what this means.

.....
.....
..... [2]

9 A golfer uses an electrically powered trolley to carry her clubs. The trolley is designed so that when it is going downhill the change in gravitational potential energy is used to generate electricity, which recharges the battery.

Explain why she will occasionally **still** need to recharge the battery from the mains supply.

.....
.....
..... [2]

- 10 There are four structural isomers of empirical formula C_4H_9Br . The **structural** formulae of two of these isomers are shown in Table 10.1.

For
Examiner's
Use

- (a) Complete Table 10.1 by drawing the **displayed** formulae of the other two isomers.

Table 10.1

isomer A $CH_3CH_2CH_2CH_2Br$	isomer B $CH_3-CH-CH_2Br$ $\quad $ $\quad CH_3$
isomer C	isomer D

[2]

- (b) Give the name of isomer B.

.....[1]

- 11 The polymerisation of propene, to form poly(propene), is an important industrial process.

Use **displayed** formulae to write an equation for the polymerisation of propene.

[2]

- 12 The graph in Fig. 12.1 shows the displacement of a water particle when a sound wave passes.

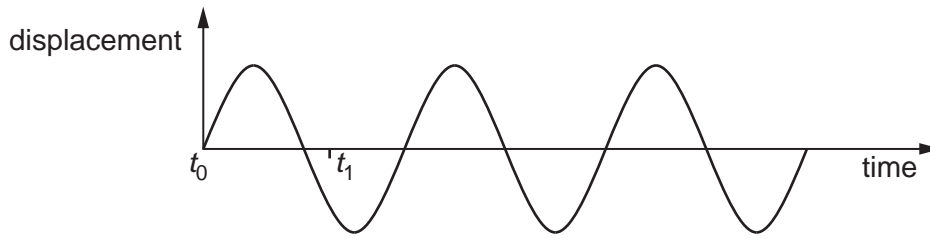


Fig. 12.1

Fig. 12.2 shows the position **W** of the water particle at time $t = t_0$.

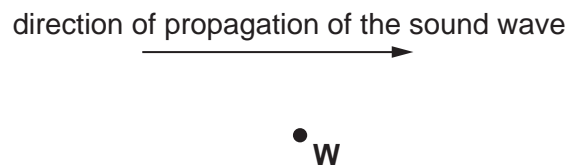


Fig. 12.2

On Fig. 12.2, draw

- (a) a possible position of the particle at time t_1 ,
- (b) an arrow to show the direction in which the particle is moving at that instant.

[2]

- 13 Fig. 13.1 shows three measuring cylinders. Cylinders **A** and **B** contain fresh water and cylinder **C** contains sea water.

For
Examiner's
Use

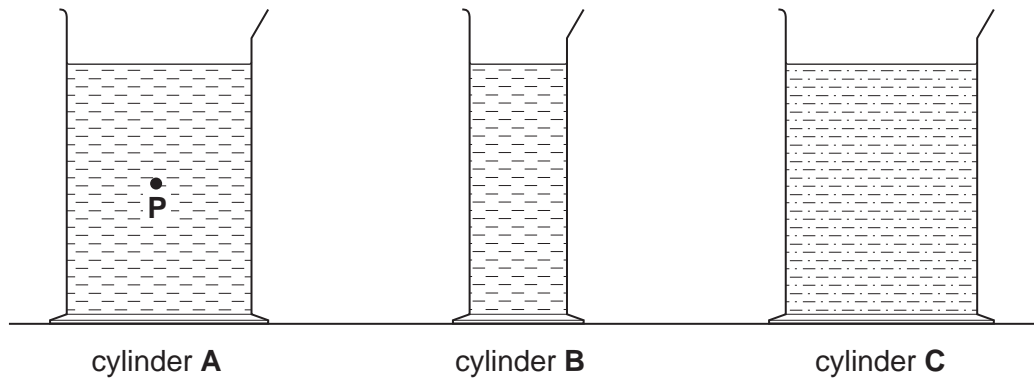


Fig. 13.1

- (a) Mark a point in cylinder **B** where the pressure exerted by the water is the same as the pressure at point **P**. Label the point **Q**.
Explain why you have chosen this point.

.....
..... [1]

- (b) Mark a point in cylinder **C** where the pressure exerted by the sea water is the same as the pressure at point **P** in cylinder **A**. Label the point **R**.
Explain why you have chosen this point.

.....
..... [1]

Question 14 is on the next page.

14 The reaction between hydrogen gas and iodine vapour to form hydrogen iodide is reversible.



For
Examiner's
Use

The activation energy for the forward reaction, $E_a(\text{F})$, (hydrogen with iodine) is 157 kJ mol^{-1} .
The activation energy for the reverse reaction, $E_a(\text{R})$, (decomposition of hydrogen iodide) is 183 kJ mol^{-1} .

On Fig. 14.1, complete the reaction pathway diagram for this reaction.

Indicate with an arrow, and label clearly,

- the activation energy for the forward reaction, $E_a(\text{F})$,
- the activation energy for the reverse reaction, $E_a(\text{R})$,
- the enthalpy change, ΔH , for the reaction.




Fig. 14.1

[3]

Permission to reproduce items where third-party owned material protected by copyright is included has been sought and cleared where possible. Every reasonable effort has been made by the publisher (UCLES) to trace copyright holders, but if any items requiring clearance have unwittingly been included, the publisher will be pleased to make amends at the earliest possible opportunity.

University of Cambridge International Examinations is part of the Cambridge Assessment Group. Cambridge Assessment is the brand name of University of Cambridge Local Examinations Syndicate (UCLES), which is itself a department of the University of Cambridge.