



UNIVERSITY OF CAMBRIDGE INTERNATIONAL EXAMINATIONS  
 General Certificate of Education  
 Advanced Subsidiary Level and Advanced Level

CANDIDATE  
NAME

CENTRE  
NUMBER

--	--	--	--	--

CANDIDATE  
NUMBER

--	--	--	--



**CHEMISTRY**

**9701/35**

Advanced Practical Skills 1

**May/June 2013**

**2 hours**

Candidates answer on the Question Paper.

Additional Materials: As listed in the Confidential Instructions

**READ THESE INSTRUCTIONS FIRST**

Write your Centre number, candidate number and name on all the work you hand in.  
 Give details of the practical session and laboratory where appropriate, in the boxes provided.  
 Write in dark blue or black pen.  
 You may use a soft pencil for any diagrams, graphs or rough working.  
 Do not use staples, paper clips, highlighters, glue or correction fluid.  
**DO NOT WRITE IN ANY BARCODES.**

Answer **all** questions.  
 Electronic calculators may be used.  
 You may lose marks if you do not show your working or if you do not use appropriate units.  
 Use of a Data Booklet is unnecessary.

Qualitative Analysis Notes are printed on pages 10 and 11.

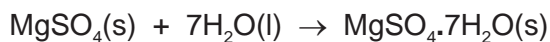
At the end of the examination, fasten all your work securely together.  
 The number of marks is given in brackets [ ] at the end of each question or part question.

<b>Session</b>	
<b>Laboratory</b>	

<b>For Examiner's Use</b>	
<b>1</b>	
<b>2</b>	
<b>Total</b>	

This document consists of **11** printed pages and **1** blank page.

- 1 You will determine the enthalpy change,  $\Delta H$ , for the reaction of anhydrous magnesium sulfate,  $\text{MgSO}_4$ , with water to form hydrated magnesium sulfate,  $\text{MgSO}_4 \cdot 7\text{H}_2\text{O}$ . In step 1 you will dissolve a known mass of anhydrous magnesium sulfate in a known volume of water and find the temperature change. In step 2 you will find the temperature change on adding a known mass of hydrated magnesium sulfate to a known volume of water. You will then use your results to calculate the enthalpy change for the reaction.



**FA 1** is anhydrous magnesium sulfate,  $\text{MgSO}_4$ .

**FA 2** is hydrated magnesium sulfate,  $\text{MgSO}_4 \cdot 7\text{H}_2\text{O}$ .

distilled water

### (a) Method

#### Step 1



- Place the plastic cup in the 250 cm<sup>3</sup> beaker.
- Use the measuring cylinder to transfer 25 cm<sup>3</sup> of distilled water into the plastic cup.
- Weigh the container with **FA 1** and record the balance reading in a suitable form in the space below.
- Place the thermometer in the water and record the initial temperature in the table of results. Tilt the cup if necessary so that the bulb of the thermometer is fully covered. This is the temperature at time zero. Start timing.
- Record the temperature of the water at 1 minute and at 2 minutes.
- At 2½ minutes tip all the **FA 1** into the water and stir to dissolve.
- Record the temperature of the solution at 3, 4, 5, 6, 7 and 8 minutes.
- Reweigh the container with any residual **FA 1** and record the balance reading and the mass of **FA 1** used.
- Rinse out the plastic cup and shake it to remove excess water.

### Results

#### Mass

#### Temperature


Time in minutes	0	1	2	3	4	5	6	7	8
Temperature / °C									

[5]

I	
II	
III	
IV	
V	

- (b) Plot temperature on the  $y$ -axis against time on the  $x$ -axis on the grid below. You will use the graph to determine the theoretical temperature change at  $2\frac{1}{2}$  minutes.

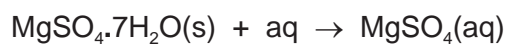
For  
Examiner's  
Use



Draw two straight lines of best fit on your graph, one for the temperature of the water before adding **FA 1** and the other for the cooling of the solution once the reaction is complete. Extrapolate the two lines to  $2\frac{1}{2}$  minutes and determine the change in temperature at this time.

temperature change at  $2\frac{1}{2}$  minutes = ..... °C  
[4]

I	
II	
III	
IV	

**(c) Method****Step 2**

- Read through the method and prepare a suitable table for your results.
- Place the plastic cup in the 250 cm<sup>3</sup> beaker.
- Use the measuring cylinder to transfer 25 cm<sup>3</sup> of distilled water into the plastic cup.
- Weigh the container with **FA 2** and record the balance reading below.
- Place the thermometer in the water and record the initial temperature. Tilt the cup if necessary so that the bulb of the thermometer is fully covered.
- Tip all the **FA 2** into the water and stir to dissolve.
- Record the lowest temperature.
- Reweigh the container with any residual **FA 2** and record the balance reading and the mass of **FA 2** used.

**Results**

I	
II	
III	

[3]

**(d) Calculations**

Show your working and appropriate significant figures in the final answer to **each** step of your calculations.

- (i)** Using your answer to **(b)**, calculate the heat energy produced when **FA 1** was added to water in **step 1**.  
(Assume that 4.3 J of heat energy changes the temperature of 1.0 cm<sup>3</sup> of solution by 1.0 °C.)

heat energy produced = ..... J

- (ii)** Calculate the enthalpy change, in kJ mol<sup>-1</sup>, when 1 mole of **FA 1**, MgSO<sub>4</sub>, is dissolved.  
(A<sub>r</sub>: O, 16.0; Mg, 24.3; S, 32.1)

enthalpy change = ..... kJ mol<sup>-1</sup>  
(sign) (value)

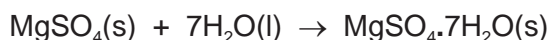
- (iii)** Using your results from **(c)**, calculate the heat energy absorbed when **FA 2** was added to water in **step 2**.  
(Assume that 4.3 J of heat energy changes the temperature of 1.0 cm<sup>3</sup> of solution by 1.0 °C.)

heat energy absorbed = ..... J

- (iv)** Calculate the enthalpy change, in kJ mol<sup>-1</sup>, when 1 mole of **FA 2**, MgSO<sub>4</sub>·7H<sub>2</sub>O, is dissolved.  
(A<sub>r</sub>: H, 1.0; O, 16.0; Mg, 24.3; S, 32.1)

enthalpy change = ..... kJ mol<sup>-1</sup>  
(sign) (value)

- (v)** Use your answers to parts **(ii)** and **(iv)** and the equations for the reactions shown in **steps 1** and **2** to determine the enthalpy change, in kJ mol<sup>-1</sup>, for the reaction below.



enthalpy change,  $\Delta H =$  ..... kJ mol<sup>-1</sup>  
(sign) (value) [6]

I	
II	
III	
IV	
V	
VI	

(e) (i) Complete the following table.

The maximum error in a single thermometer reading is ..... °C.
The maximum error in measuring the change in temperature in <b>step 2</b> is ..... °C.

(ii) Calculate the maximum percentage error in the temperature change in **step 2**.

maximum percentage error in the temperature change in **step 2** = ..... %  
[2]

(f) (i) A student suggested that the experiment could be made more accurate by using 50 cm<sup>3</sup> of water in **step 1** and **step 2**. State whether the student is correct or incorrect and justify your answer.

The student is .....

because .....

.....  
[1]

(ii) Another student carried out **step 2** twice for a different hydrated salt and obtained the following results.

First result: mass used = 3.34 g; drop in temperature = 4.0 °C

Second result: mass used = 4.18 g; drop in temperature = 5.0 °C

The student then used the mean mass and mean temperature drop when calculating the enthalpy change for the reaction. Explain whether or not the student was justified in using the results in this way, by showing appropriate calculations.

.....  
.....  
.....  
.....

[2]

[Total: 23]

## 2 Qualitative Analysis

At each stage of any test you are to record details of the following.

- colour changes seen
- the formation of any precipitate
- the solubility of such precipitates in an excess of the reagent added

Where gases are released they should be identified by a test, **described in the appropriate place in your observations.**

You should indicate clearly at what stage in a test a change occurs.

Marks are **not** given for chemical equations.

**No additional tests for ions present should be attempted.**

**If any solution is warmed, a boiling tube MUST be used.**

Rinse and reuse test-tubes and boiling tubes where possible.

**Where reagents are selected for use in a test, the name or correct formula of the element or compound must be given.**

**FA 3, FA 4 and FA 5** are aqueous solutions of salts. Read through the tests before starting the practical work.

**(a)** Many cations are identified by using aqueous sodium hydroxide and aqueous ammonia in small amounts and then to excess. Carry out the following tests and record all your observations in the table below.

Do **not** discard the final products in these tests as you will need to use them in part **(b)**.

<i>test</i>	<i>observations</i>		
	<b>FA 3</b>	<b>FA 4</b>	<b>FA 5</b>
<b>(i)</b> To 1 cm depth of solution in a test-tube, add aqueous sodium hydroxide,			
until in excess.			
(do not discard)			
<b>(ii)</b> To 1 cm depth of solution in a test-tube, add aqueous ammonia,			
until in excess.			
(do not discard)			

[3]

**(b)** At least one of the solutions contains a second cation, the ammonium ion,  $\text{NH}_4^+$ . Devise a test to identify which salt or salts contain the ammonium ion. You are to use the products of the reactions in **(a)** when carrying out your test.

**(i)** Which of the following sets of products will you use in your test? Tick the appropriate box.

- products with excess aqueous sodium hydroxide
- products with excess aqueous ammonia

**(ii)** Describe the test and expected observations if  $\text{NH}_4^+$  is present.

.....

.....

.....

**(iii)** Carry out your test and record your observations clearly in the space below.

[4]



- (c) **FA 3**, **FA 4** and **FA 5** each contains a different anion which is sulfate, chloride, or nitrate. Using the Qualitative Analysis Notes on page 11, select reagents to allow you to identify positively which anion is in each salt using the minimum number of tests. Record your reagents and your observations in the table below.

For  
Examiner's  
Use

Indicate where a test is unnecessary using a dash, —.

reagent(s)	FA 3	FA 4	FA 5

I	
II	
III	
IV	
V	

[5]

- (d) From your observations in (a), (b) and (c), identify as many ions that could be present as possible.

	FA 3	FA 4	FA 5
cation(s)			
anion			

I	
II	
III	
IV	
V	

[5]

[Total: 17]

## Qualitative Analysis Notes

Key: [ppt. = precipitate]

## 1 Reactions of aqueous cations

ion	reaction with	
	NaOH(aq)	NH <sub>3</sub> (aq)
aluminium, Al <sup>3+</sup> (aq)	white ppt. soluble in excess	white ppt. insoluble in excess
ammonium, NH <sub>4</sub> <sup>+</sup> (aq)	no ppt. ammonia produced on heating	–
barium, Ba <sup>2+</sup> (aq)	no ppt. (if reagents are pure)	no ppt.
calcium, Ca <sup>2+</sup> (aq)	white ppt. with high [Ca <sup>2+</sup> (aq)]	no ppt.
chromium(III), Cr <sup>3+</sup> (aq)	grey-green ppt. soluble in excess giving dark green solution	grey-green ppt. insoluble in excess
copper(II), Cu <sup>2+</sup> (aq)	pale blue ppt. insoluble in excess	blue ppt. soluble in excess giving dark blue solution
iron(II), Fe <sup>2+</sup> (aq)	green ppt. turning brown on contact with air insoluble in excess	green ppt. turning brown on contact with air insoluble in excess
iron(III), Fe <sup>3+</sup> (aq)	red-brown ppt. insoluble in excess	red-brown ppt. insoluble in excess
lead(II), Pb <sup>2+</sup> (aq)	white ppt. soluble in excess	white ppt. insoluble in excess
magnesium, Mg <sup>2+</sup> (aq)	white ppt. insoluble in excess	white ppt. insoluble in excess
manganese(II), Mn <sup>2+</sup> (aq)	off-white ppt. rapidly turning brown on contact with air insoluble in excess	off-white ppt. rapidly turning brown on contact with air insoluble in excess
zinc, Zn <sup>2+</sup> (aq)	white ppt. soluble in excess	white ppt. soluble in excess

[Lead(II) ions can be distinguished from aluminium ions by the insolubility of lead(II) chloride.]

## 2 Reactions of anions

<i>ion</i>	<i>reaction</i>
carbonate, $\text{CO}_3^{2-}$	$\text{CO}_2$ liberated by dilute acids
chromate(VI), $\text{CrO}_4^{2-}(\text{aq})$	yellow solution turns orange with $\text{H}^+(\text{aq})$ ; gives yellow ppt. with $\text{Ba}^{2+}(\text{aq})$ ; gives bright yellow ppt. with $\text{Pb}^{2+}(\text{aq})$
chloride, $\text{Cl}^-(\text{aq})$	gives white ppt. with $\text{Ag}^+(\text{aq})$ (soluble in $\text{NH}_3(\text{aq})$ ); gives white ppt. with $\text{Pb}^{2+}(\text{aq})$
bromide, $\text{Br}^-(\text{aq})$	gives cream ppt. with $\text{Ag}^+(\text{aq})$ (partially soluble in $\text{NH}_3(\text{aq})$ ); gives white ppt. with $\text{Pb}^{2+}(\text{aq})$
iodide, $\text{I}^-(\text{aq})$	gives yellow ppt. with $\text{Ag}^+(\text{aq})$ (insoluble in $\text{NH}_3(\text{aq})$ ); gives yellow ppt. with $\text{Pb}^{2+}(\text{aq})$
nitrate, $\text{NO}_3^-(\text{aq})$	$\text{NH}_3$ liberated on heating with $\text{OH}^-(\text{aq})$ and $\text{Al}$ foil
nitrite, $\text{NO}_2^-(\text{aq})$	$\text{NH}_3$ liberated on heating with $\text{OH}^-(\text{aq})$ and $\text{Al}$ foil; $\text{NO}$ liberated by dilute acids (colourless $\text{NO} \rightarrow$ (pale) brown $\text{NO}_2$ in air)
sulfate, $\text{SO}_4^{2-}(\text{aq})$	gives white ppt. with $\text{Ba}^{2+}(\text{aq})$ or with $\text{Pb}^{2+}(\text{aq})$ (insoluble in excess dilute strong acids)
sulfite, $\text{SO}_3^{2-}(\text{aq})$	$\text{SO}_2$ liberated with dilute acids; gives white ppt. with $\text{Ba}^{2+}(\text{aq})$ (soluble in excess dilute strong acids)

## 3 Tests for gases

<i>gas</i>	<i>test and test result</i>
ammonia, $\text{NH}_3$	turns damp red litmus paper blue
carbon dioxide, $\text{CO}_2$	gives a white ppt. with limewater (ppt. dissolves with excess $\text{CO}_2$ )
chlorine, $\text{Cl}_2$	bleaches damp litmus paper
hydrogen, $\text{H}_2$	"pops" with a lighted splint
oxygen, $\text{O}_2$	relights a glowing splint
sulfur dioxide, $\text{SO}_2$	turns acidified aqueous potassium dichromate(VI) from orange to green

---

Permission to reproduce items where third-party owned material protected by copyright is included has been sought and cleared where possible. Every reasonable effort has been made by the publisher (UCLES) to trace copyright holders, but if any items requiring clearance have unwittingly been included the publisher will be pleased to make amends at the earliest possible opportunity.

University of Cambridge International Examinations is part of the Cambridge Assessment Group. Cambridge Assessment is the brand name of University of Cambridge Local Examinations Syndicate (UCLES), which is itself a department of the University of Cambridge.