

Surname						Other Names					
Centre Number						Candidate Number					
Candidate Signature											

Leave blank
-------------

General Certificate of Education  
 June 2004  
 Advanced Level Examination



**PHYSICS (SPECIFICATION A)**  
**Unit 7 Nuclear Instability: Applied Physics Option**

**PHA7/W**

Thursday 17 June 2004 Morning Session

**In addition to this paper you will require:**

- a calculator;
- a pencil and a ruler.

For Examiner's Use			
Number	Mark	Number	Mark
1			
2			
3			
4			
5			
Total (Column 1)	→		
Total (Column 2)	→		
TOTAL			
Examiner's Initials			

Time allowed: 1 hour 15 minutes

**Instructions**

- Use blue or black ink or ball-point pen.
- Fill in the boxes at the top of this page.
- Answer **all** questions in the spaces provided. All working must be shown.
- Do all rough work in this book. Cross through any work you do not want marked.

**Information**

- The maximum mark for this paper is 40.
- Mark allocations are shown in brackets.
- The paper carries 10% of the total marks for Physics Advanced.
- A *Data Sheet* is provided on pages 3 and 4. You may wish to detach this perforated sheet at the start of the examination.
- You are expected to use a calculator where appropriate.
- In questions requiring description and explanation you will be assessed on your ability to use an appropriate form and style of writing, to organise relevant information clearly and coherently, and to use specialist vocabulary where appropriate. The degree of legibility of your handwriting and the level of accuracy of your spelling, punctuation and grammar will also be taken into account.

**Data Sheet**

- A perforated *Data Sheet* is provided as pages 3 and 4 of this question paper.
- This sheet may be useful for answering some of the questions in the examination.
- You may wish to detach this sheet before you begin work.

**Fundamental constants and values**

Quantity	Symbol	Value	Units
speed of light in vacuo	$c$	$3.00 \times 10^8$	$\text{m s}^{-1}$
permeability of free space	$\mu_0$	$4\pi \times 10^{-7}$	$\text{H m}^{-1}$
permittivity of free space	$\epsilon_0$	$8.85 \times 10^{-12}$	$\text{F m}^{-1}$
charge of electron	$e$	$1.60 \times 10^{-19}$	C
the Planck constant	$h$	$6.63 \times 10^{-34}$	J s
gravitational constant	$G$	$6.67 \times 10^{-11}$	$\text{N m}^2 \text{kg}^{-2}$
the Avogadro constant	$N_A$	$6.02 \times 10^{23}$	$\text{mol}^{-1}$
molar gas constant	$R$	8.31	$\text{J K}^{-1} \text{mol}^{-1}$
the Boltzmann constant	$k$	$1.38 \times 10^{-23}$	$\text{J K}^{-1}$
the Stefan constant	$\sigma$	$5.67 \times 10^{-8}$	$\text{W m}^{-2} \text{K}^{-4}$
the Wien constant	$a$	$2.90 \times 10^{-3}$	m K
electron rest mass	$m_e$	$9.11 \times 10^{-31}$	kg
(equivalent to $5.5 \times 10^{-4} \text{u}$ )			
electron charge/mass ratio	$e/m_e$	$1.76 \times 10^{11}$	$\text{C kg}^{-1}$
proton rest mass	$m_p$	$1.67 \times 10^{-27}$	kg
(equivalent to 1.00728u)			
proton charge/mass ratio	$e/m_p$	$9.58 \times 10^7$	$\text{C kg}^{-1}$
neutron rest mass	$m_n$	$1.67 \times 10^{-27}$	kg
(equivalent to 1.00867u)			
gravitational field strength	$g$	9.81	$\text{N kg}^{-1}$
acceleration due to gravity	$g$	9.81	$\text{m s}^{-2}$
atomic mass unit	$u$	$1.661 \times 10^{-27}$	kg
(1u is equivalent to 931.3 MeV)			

**Fundamental particles**

Class	Name	Symbol	Rest energy /MeV
photon	photon	$\gamma$	0
lepton	neutrino	$\nu_e$	0
		$\nu_\mu$	0
	electron	$e^\pm$	0.510999
mesons	muon	$\mu^\pm$	105.659
	pion	$\pi^\pm$	139.576
		$\pi^0$	134.972
	kaon	$K^\pm$	493.821
baryons		$K^0$	497.762
	proton	$p$	938.257
	neutron	$n$	939.551

**Properties of quarks**

Type	Charge	Baryon number	Strangeness
u	$+\frac{2}{3}$	$+\frac{1}{3}$	0
d	$-\frac{1}{3}$	$+\frac{1}{3}$	0
s	$-\frac{1}{3}$	$+\frac{1}{3}$	-1

**Geometrical equations**

- arc length =  $r\theta$
- circumference of circle =  $2\pi r$
- area of circle =  $\pi r^2$
- area of cylinder =  $2\pi rh$
- volume of cylinder =  $\pi r^2 h$
- area of sphere =  $4\pi r^2$
- volume of sphere =  $\frac{4}{3}\pi r^3$

**Mechanics and Applied Physics**

- $v = u + at$
- $s = \left(\frac{u+v}{2}\right)t$
- $s = ut + \frac{at^2}{2}$
- $v^2 = u^2 + 2as$
- $F = \frac{\Delta(mv)}{\Delta t}$
- $P = Fv$
- $\text{efficiency} = \frac{\text{power output}}{\text{power input}}$
- $\omega = \frac{v}{r} = 2\pi f$
- $a = \frac{v^2}{r} = r\omega^2$
- $I = \sum mr^2$
- $E_k = \frac{1}{2}I\omega^2$
- $\omega_2 = \omega_1 + at$
- $\theta = \omega_1 t + \frac{1}{2}at^2$
- $\omega_2^2 = \omega_1^2 + 2a\theta$
- $\theta = \frac{1}{2}(\omega_1 + \omega_2)t$
- $T = I\alpha$
- angular momentum =  $I\omega$
- $W = T\theta$
- $P = T\omega$
- angular impulse = change of angular momentum =  $Tt$
- $\Delta Q = \Delta U + \Delta W$
- $\Delta W = p\Delta V$
- $pV^\gamma = \text{constant}$
- work done per cycle = area of loop
- input power = calorific value  $\times$  fuel flow rate
- indicated power as (area of  $p-V$  loop)  $\times$  (no. of cycles/s)  $\times$  (no. of cylinders)
- friction power = indicated power - brake power
- $\text{efficiency} = \frac{W}{Q_{in}} = \frac{Q_{in} - Q_{out}}{Q_{in}}$
- maximum possible  $\text{efficiency} = \frac{T_H - T_C}{T_H}$

**Fields, Waves, Quantum Phenomena**

- $g = \frac{F}{m}$
- $g = -\frac{GM}{r^2}$
- $g = -\frac{\Delta V}{\Delta x}$
- $V = -\frac{GM}{r}$
- $a = -(2\pi f)^2 x$
- $v = \pm 2\pi f \sqrt{A^2 - x^2}$
- $x = A \cos 2\pi ft$
- $T = 2\pi \sqrt{\frac{m}{k}}$
- $T = 2\pi \sqrt{\frac{L}{g}}$
- $\lambda = \frac{\omega S}{D}$
- $d \sin \theta = n\lambda$
- $\theta \approx \frac{\lambda}{D}$
- $n_2 = \frac{\sin \theta_1}{\sin \theta_2} = \frac{c_1}{c_2}$
- $n_2 = \frac{n_2}{n_1}$
- $\sin \theta_c = \frac{1}{n}$
- $E = hf$
- $hf = \phi + E_k$
- $hf = E_1 - E_2$
- $\lambda = \frac{h}{p} = \frac{h}{mv}$
- $c = \frac{1}{\sqrt{\mu_0 \epsilon_0}}$
- Electricity**
- $\epsilon = \frac{E}{Q}$
- $\epsilon = I(R + r)$
- $\frac{1}{R_T} = \frac{1}{R_1} + \frac{1}{R_2} + \frac{1}{R_3} + \dots$
- $R_T = R_1 + R_2 + R_3 + \dots$
- $P = I^2 R$
- $E = \frac{F}{Q} = \frac{V}{d}$
- $E = \frac{1}{4\pi \epsilon_0} \frac{Q}{r^2}$
- $E = \frac{1}{2} QV$
- $F = BIl$
- $F = BQv$
- $Q = Q_0 e^{-t/RC}$
- $\phi = BA$

$$\text{magnitude of induced e.m.f.} = N \frac{\Delta\Phi}{\Delta t}$$

$$I_{\text{rms}} = \frac{I_0}{\sqrt{2}}$$

$$V_{\text{rms}} = \frac{V_0}{\sqrt{2}}$$

### Mechanical and Thermal Properties

$$\text{the Young modulus} = \frac{\text{tensile stress}}{\text{tensile strain}} = \frac{F}{A} \frac{l}{e}$$

$$\text{energy stored} = \frac{1}{2} Fe$$

$$\Delta Q = mc \Delta\theta$$

$$\Delta Q = ml$$

$$pV = \frac{1}{3} Nmc^2$$

$$\frac{1}{2} mc^2 = \frac{3}{2} kT = \frac{3RT}{2N_A}$$

### Nuclear Physics and Turning Points in Physics

$$\text{force} = \frac{eV_p}{d}$$

$$\text{force} = Bev$$

$$\text{radius of curvature} = \frac{mv}{Be}$$

$$\frac{eV}{d} = mg$$

$$\text{work done} = eV$$

$$F = 6\pi\eta rv$$

$$I = k \frac{I_0}{x^2}$$

$$\frac{\Delta N}{\Delta t} = -\lambda N$$

$$\lambda = \frac{h}{\sqrt{2meV}}$$

$$N = N_0 e^{-\lambda t}$$

$$T_{\frac{1}{2}} = \frac{\ln 2}{\lambda}$$

$$R = r_0 A^{\frac{1}{3}}$$

$$E = mc^2 = \frac{m_0 c^2}{\left(1 - \frac{v^2}{c^2}\right)^{\frac{1}{2}}}$$

$$l = l_0 \left(1 - \frac{v^2}{c^2}\right)^{\frac{1}{2}}$$

$$t = \frac{t_0}{\left(1 - \frac{v^2}{c^2}\right)^{\frac{1}{2}}}$$

### Astrophysics and Medical Physics

Body	Mass/kg	Mean radius/m
Sun	$2.00 \times 10^{30}$	$7.00 \times 10^8$
Earth	$6.00 \times 10^{24}$	$6.40 \times 10^6$

$$1 \text{ astronomical unit} = 1.50 \times 10^{11} \text{ m}$$

$$1 \text{ parsec} = 206265 \text{ AU} = 3.08 \times 10^{16} \text{ m} = 3.26 \text{ ly}$$

$$1 \text{ light year} = 9.45 \times 10^{15} \text{ m}$$

$$\text{Hubble constant (H)} = 65 \text{ km s}^{-1} \text{ Mpc}^{-1}$$

$$M = \frac{\text{angle subtended by image at eye}}{\text{angle subtended by object at unaided eye}}$$

$$M = \frac{f_o}{f_e}$$

$$m - M = 5 \log \frac{d}{10}$$

$$\lambda_{\text{max}} T = \text{constant} = 0.0029 \text{ m K}$$

$$v = Hd$$

$$P = \sigma AT^4$$

$$\frac{\Delta f}{f} = \frac{v}{c}$$

$$\frac{\Delta \lambda}{\lambda} = -\frac{v}{c}$$

$$R_s \approx \frac{2GM}{c^2}$$

### Medical Physics

$$\text{power} = \frac{1}{f}$$

$$\frac{1}{u} + \frac{1}{v} = \frac{1}{f} \text{ and } m = \frac{v}{u}$$

$$\text{intensity level} = 10 \log \frac{I}{I_0}$$

$$I = I_0 e^{-\mu x}$$

$$\mu_m = \frac{\mu}{\rho}$$

### Electronics

#### Resistors

Preferred values for resistors (E24)  
Series: 1.0 1.1 1.2 1.3 1.5 1.6 1.8 2.0 2.2  
2.4 2.7 3.0 3.3 3.6 3.9 4.3 4.7 5.1 5.6 6.2  
6.8 7.5 8.2 9.1 ohms  
and multiples that are ten times greater

$$Z = \frac{V_{\text{rms}}}{I_{\text{rms}}}$$

$$\frac{1}{C_T} = \frac{1}{C_1} + \frac{1}{C_2} + \frac{1}{C_3} + \dots$$

$$C_T = C_1 + C_2 + C_3 + \dots$$

$$X_C = \frac{1}{2\pi f C}$$

### Alternating Currents

$$f = \frac{1}{T}$$

### Operational amplifier

$$G = \frac{V_{\text{out}}}{V_{\text{in}}} \quad \text{voltage gain}$$

$$G = -\frac{R_f}{R_1} \quad \text{inverting}$$

$$G = 1 + \frac{R_f}{R_1} \quad \text{non-inverting}$$

$$V_{\text{out}} = -R_f \left( \frac{V_1}{R_1} + \frac{V_2}{R_2} + \frac{V_3}{R_3} \right) \quad \text{summing}$$

**TURN OVER FOR THE FIRST QUESTION**

**SECTION A: NUCLEAR INSTABILITY**

Answer **all** parts of the question.

- 1 (a) A radioactive source gives an initial count rate of 110 counts per second. After 10 minutes the count rate is 84 counts per second.

background radiation = 3 counts per second

- (i) Give **three** origins of the radiation that contributes to this background radiation.

1 .....

2 .....

3 .....

- (ii) Calculate the decay constant of the radioactive source in  $s^{-1}$ .

.....  
.....  
.....  
.....  
.....  
.....  
.....

- (iii) Calculate the number of radioactive nuclei in the initial sample assuming that the detector counts all the radiation emitted from the source.

.....  
.....  
.....  
.....

(7 marks)

- (b) Discuss the dangers of exposing the human body to a source of  $\alpha$  radiation. In particular compare the dangers when the  $\alpha$  source is held outside, but in contact with the body, with those when the source is placed inside the body.

You may be awarded marks for the quality of written communication in your answer.

.....

.....

.....

.....

.....

.....

.....

.....

.....

.....

.....

.....

.....

.....

(3 marks)

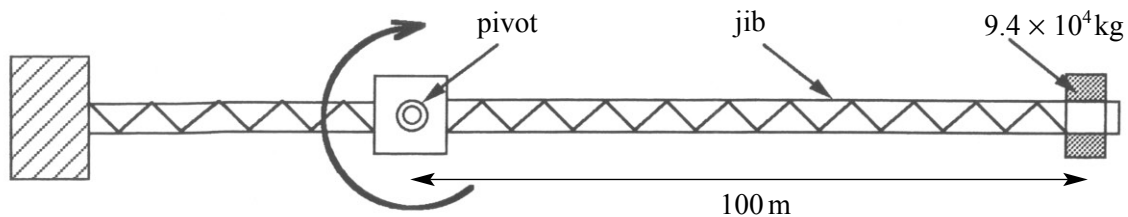
10

**TURN OVER FOR THE NEXT QUESTION**

## SECTION B: APPLIED PHYSICS

Answer **all** questions.

- 2 The diagram shows an overhead view of the jib of a tower crane carrying its maximum permitted load of  $9.4 \times 10^4 \text{ kg}$  at a distance of 100 m from the pivot of the jib. The manufacturer states that, under these conditions, at least 2.5 minutes must be allowed for one complete turn of the jib at constant speed.



- (a) The moment of inertia of the unloaded jib about the pivot is  $5.3 \times 10^8 \text{ kg m}^2$ .
- (i) Calculate the moment of inertia of the jib when carrying its maximum load, as shown in the diagram.

.....

.....

.....

- (ii) Calculate the maximum permitted angular speed of the jib, in  $\text{rad s}^{-1}$ .
- .....
- .....
- .....
- (iii) Show that the rotational kinetic energy of the jib when rotating at this angular speed is  $1.3 \times 10^6 \text{ J}$ .

.....

.....

.....

(3 marks)



- (b) When the jib is at maximum loading, the motor used to rotate it accelerates the jib from rest to its maximum permitted angular speed in 25 s. Assuming that frictional forces can be neglected, calculate the output power of the motor.

.....  
.....  
.....

(1 mark)

- (c) When frictional forces in the bearing are taken into account and the jib is rotating at its maximum permitted speed, the motor must produce an output power of 3.0 kW to do work against the frictional torque. Calculate

- (i) the frictional torque in the bearings,

.....  
.....  
.....

- (ii) the total work done against friction in making one turn.

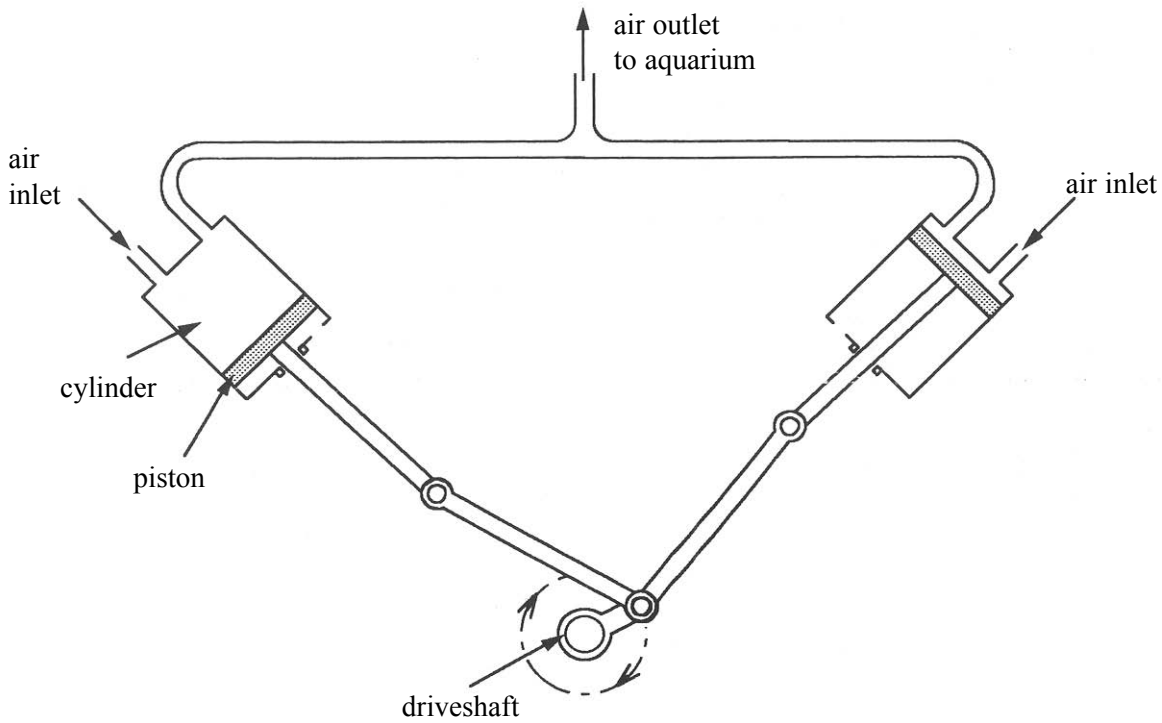
.....  
.....  
.....

(2 marks)

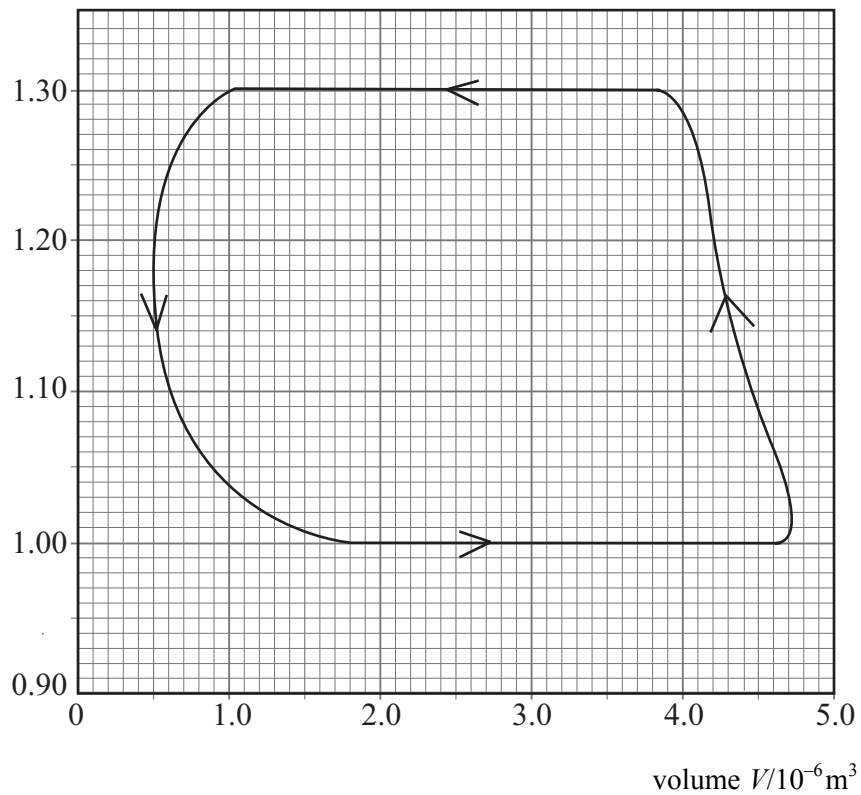


**TURN OVER FOR THE NEXT QUESTION**

- 3 A small, two-cylinder pump shown in the diagram is used for aerating water in an aquarium. The two cylinders are identical and each has a piston driven by a rotating driveshaft so that both cylinders pump air to the aquarium during one rotation of the driveshaft. The inlet and outlet valves controlling the airflow are not shown.



pressure  $p/10^5 \text{ Pa}$



Air at a pressure of  $1.00 \times 10^5$  Pa is drawn into the cylinders, is compressed and exhausted to an underwater outlet in the aquarium, where it is released as a stream of bubbles. The graph shows the  $p$ - $V$  diagram for one cycle of one cylinder.

- (a) Use the graph to determine the outlet pressure of the air from the pump.

.....  
(1 mark)

- (b) Estimate

- (i) the net work done on the air in one cylinder during one revolution of the driveshaft,

.....  
.....  
.....  
.....  
.....

- (ii) the power input to the pump if the driveshaft rotates at  $360 \text{ rev min}^{-1}$ .

.....  
.....  
.....  
.....

(6 marks)

- (c) Give **one** reason why the motor driving the pump would need to have a greater power than your answer to part (b) (ii).

.....  
.....

(1 mark)

—  
8

- 4 (a) The first law of thermodynamics can be represented by  $\Delta Q = \Delta U + \Delta W$ .

State and explain, with reference to the equation, **two** ways in which the internal energy of a gas can be decreased.

You may be awarded marks for the quality of written communication in your answer.

.....

.....

.....

.....

.....

.....

.....

.....

(3 marks)

- (b) A volume of  $20 \text{ m}^3$  of exhaust gas from a diesel engine leaves the exhaust pipe at a pressure of  $1.0 \times 10^5 \text{ Pa}$ . The gas is cooled by the surrounding atmosphere, which is also at a pressure of  $1.0 \times 10^5 \text{ Pa}$ , and, as a result, the exhaust gas contracts to half its volume.

- (i) Calculate the work done by the atmosphere on the gas during this contraction.

.....

.....

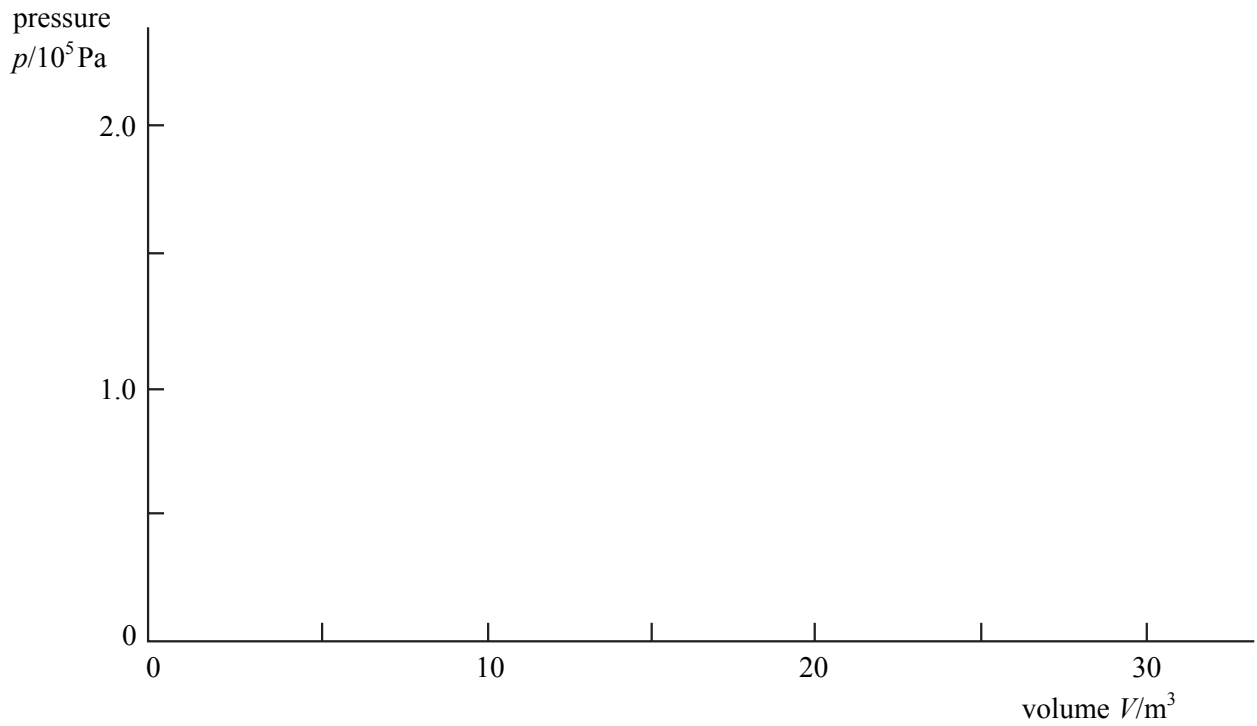
- (ii) 4.9 MJ of heat is transferred to the atmosphere during cooling. Using the first law of thermodynamics, calculate the change in internal energy of the gas.

.....

.....

.....

- (iii) Use the axes below to represent this process as a  $p$ - $V$  diagram, showing the direction of the process.



(5 marks)

8

**TURN OVER FOR THE NEXT QUESTION**

5 After replacing a tyre on a car wheel, the wheel must be ‘balanced’ before refitting on the car to prevent excessive vibration. The wheel is balanced using a wheel-balancing machine which measures the characteristics of the wheel as it rotates at steady speed. One such machine has a cycle of operation in which the wheel is accelerated uniformly from rest to an angular speed of  $35 \text{ rad s}^{-1}$  during the first 1.7 s. It is kept at constant speed while measurements are made and finally braked uniformly to rest in the last 3.0 s. The complete cycle takes 12 s.

(a) Calculate

(i) the angular acceleration of the wheel during the first part of the cycle,

.....  
.....

(ii) the torque needed to produce this acceleration in a wheel which has a moment of inertia of  $0.85 \text{ kg m}^2$ ,

.....  
.....

(iii) the angular impulse applied to this wheel during the first part of the cycle.

.....  
.....

(3 marks)

(b) Show that the wheel makes approximately 54 turns during one cycle of operation.

.....  
.....  
.....  
.....  
.....  
.....  
.....  
.....  
.....

(3 marks)

**QUALITY OF WRITTEN COMMUNICATION** (2 marks)

**END OF QUESTIONS**

**THERE ARE NO QUESTIONS PRINTED ON THIS PAGE**

**THERE ARE NO QUESTIONS PRINTED ON THIS PAGE**