

Surname						Other Names					
Centre Number						Candidate Number					
Candidate Signature											

Leave blank

General Certificate of Education
June 2006
Advanced Level Examination



**BIOLOGY (SPECIFICATION A)
Unit 8 (Written Synoptic)**

BYA8/W

Friday 23 June 2006 1.30 pm to 3.15 pm

<p>For this paper you must have:</p> <ul style="list-style-type: none"> a ruler with millimetre measurements <p>You may use a calculator.</p>

Time allowed: 1 hour 45 minutes

Instructions

- Use blue or black ink or ball-point pen.
- Fill in the boxes at the top of this page.
- Answer **all** questions but note that **Question 3** offers a choice of essays. **Question 3** should be answered in continuous prose.
- Answer all questions in the spaces provided.
- Do all rough work in this book. Cross through any work you do not want marked.
- Use accurate scientific terminology in all your answers.

Information

- The maximum mark for this paper is 60.
- The marks for questions are shown in brackets.
- This unit assesses your understanding of the relationship between the different aspects of biology.
- You are reminded of the need for good English and clear presentation in your answers.
- Quality of Written Communication will be assessed in the answer to **Question 3**.

For Examiner's Use			
Number	Mark	Number	Mark
1			
2			
3			
Total (Column 1) →			
Total (Column 2) →			
TOTAL			
Examiner's Initials			

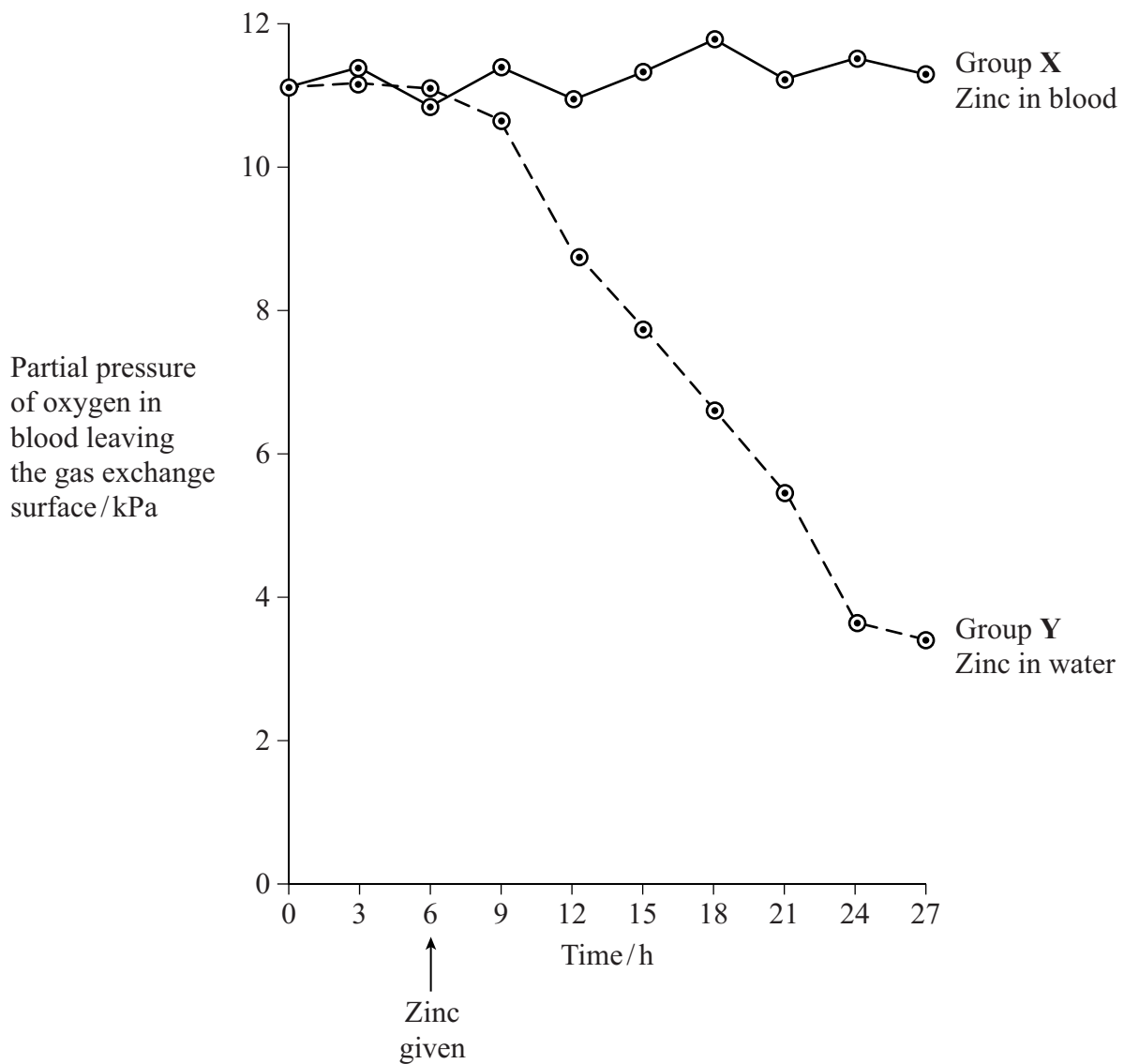
Answer **all** questions in the spaces provided.

- 1 Ions of metals such as zinc often pollute rivers. The effect of zinc ions on gas exchange and respiration in fish was investigated. Fish were kept in tanks of water in a laboratory.

The fish in one group (X) had a solution of a zinc compound injected directly into their blood and were then put in a tank of zinc-free water.

A second group (Y) was not injected but had the solution of the zinc compound added to the water in the tank.

The partial pressure of oxygen in the blood of both groups of fish was then monitored. The results are shown in the graph.



- (a) During this investigation, the water temperature in the tanks was kept constant. Explain why changes in the water temperature might lead to the results of the investigation being unreliable.

.....

..... www.theallpapers.com

(b) The results from the two groups were compared using a statistical test.

(i) Suggest a null hypothesis that could be tested.

.....
.....
(1 mark)

(ii) Explain why it is important to use a statistical test in analysing the results of this investigation.

.....
.....
.....
.....
(2 marks)

(c) Two suggestions were made to explain the results shown in the graph.

- A** Zinc ions reduce the rate at which oxygen is taken up from the water and passes into the blood.
- B** Zinc ions reduce the ability of haemoglobin to transport oxygen.

Which of these suggestions is the more likely? Explain the evidence from the graph that supports your answer.

.....
.....
.....
.....
(2 marks)

(d) During the investigation, the pH of the blood was also monitored. It decreased in group Y. Suggest an explanation for this decrease in pH.

.....
.....
.....
.....
.....
(3 marks)

- (e) Leaves were collected from sycamore trees growing in a polluted wood and the concentration of some metal ions in samples of these leaves was measured. Woodlice were then fed with the leaves. After 20 weeks, the concentration of the ions in the bodies of the woodlice was measured. Some of the results are shown in the table.

	Concentration of ions / $\mu\text{g g}^{-1}$			
	Copper	Cadmium	Zinc	Lead
Leaves	52	26	1430	908
Woodlice	1130	525	1370	132

- (i) Which of the elements shown in the table is concentrated most by the woodlice? Use suitable calculations to support your answer.

(2 marks)

- (ii) Suggest what happens to most of the lead ions in the leaves eaten by the woodlice.

.....

(1 mark)

- (iii) Explain the difference in the copper ion concentration between the leaves and the woodlice.

.....

(2 marks)

(f) Yorkshire fog is a species of grass. Two varieties of Yorkshire fog were studied. One variety was tolerant to arsenic, while the other variety was not. In a series of investigations, it was found that

- Arsenic-tolerant plants grow in soil which contains a high concentration of arsenic.
- Arsenic-tolerant plants growing in soil containing high concentrations of arsenic and phosphorus-containing compounds have very low concentrations of arsenic in their cells. They also have low concentrations of phosphates in their cells. Arsenic and phosphorus are chemically similar.
- Plants that are not tolerant to arsenic grow poorly on soil which has a high concentration of both arsenic and phosphorus-containing compounds.
- Tolerance to arsenic in Yorkshire fog is caused by a single gene with the allele, **a**, for tolerance recessive to the allele, **A**, for non-tolerance.

(i) What caused the allele for tolerance to first arise?

.....

 (1 mark)

(ii) Give **two** functions of phosphates in plant cells.

1

 2

 (2 marks)

(iii) Arsenic-tolerant Yorkshire fog plants are very rare in areas with low concentrations of arsenic in the soil, even where the soil has a high concentration of phosphate. Explain why they are unable to compete in these conditions with plants that are not tolerant to arsenic.

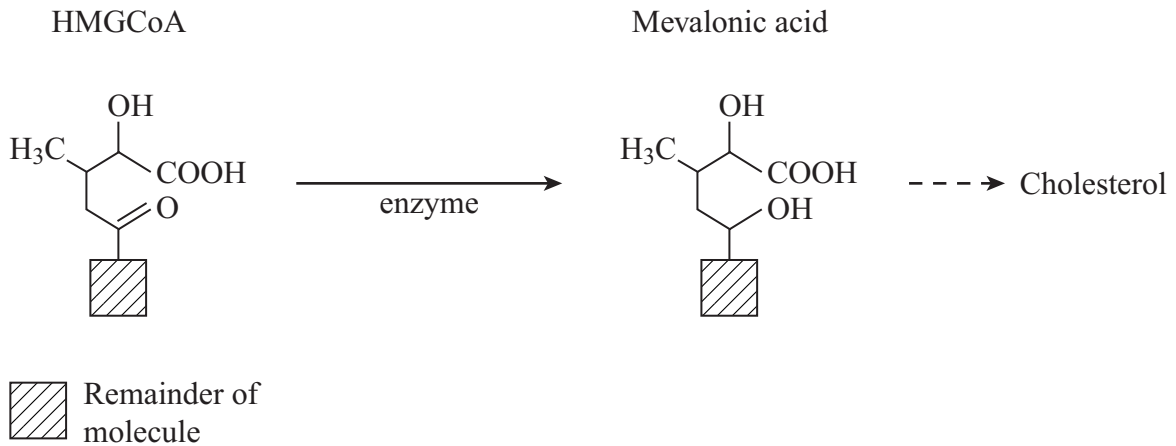
.....

 (3 marks)

2 Read the following passage.

Cholesterol is a lipid. It is an important component of cell membranes and it is the starting point for the synthesis of a number of sex hormones. About half of our daily cholesterol requirement is absorbed from the gut. The remainder is synthesised in the liver. The pathway by which it is synthesised is shown in **Figure 1**.

Figure 1



- 5 Because cholesterol is not soluble in water, it cannot be transported in solution in the blood. Instead it is transported combined with other substances such as low-density lipoprotein (LDL).

Cells which take up cholesterol have areas on their plasma membranes called coated pits. Receptor proteins are located round these pits. These receptor proteins bind to LDLs. The membrane then engulfs the LDL particles and forms a vesicle, which is taken into the cytoplasm of the cell. Here the vesicles fuse with lysosomes and the cholesterol is released. Some enters the nucleus of the cell where it shuts down the genes responsible for synthesising LDL receptors.

- 15 Unfortunately, high blood cholesterol concentration is linked to an increased risk of heart attacks and strokes. Blood cholesterol concentration may be reduced by a suitable diet but there is also a group of drugs which lower cholesterol concentration. These are the statins and they work by inhibiting the enzyme which catalyses the reaction shown in **Figure 1**.

Use information in the passage and your own knowledge to answer the questions.

- (a) Cholesterol is converted to oestrogen in the ovaries. It reaches the ovaries in the ovarian artery. List the arteries and veins involved in taking cholesterol from the site of its synthesis to the ovarian artery.

.....
.....
.....
.....

(2 marks)

- (b) (i) Name the process by which cholesterol enters a cell.

.....

(1 mark)

- (ii) Describe the role of lysosomes in releasing cholesterol in the cytoplasm of a cell.

.....
.....
.....
.....

(2 marks)

- (c) Familial hypercholesterolaemia (FH) is a genetic disease in which cells do not take up cholesterol from the blood. As a result, people with the disease have a high blood cholesterol concentration and are very likely to have a heart attack. Suggest how possession of the alleles for FH results in a high blood cholesterol concentration.

.....
.....
.....
.....
.....
.....

(3 marks)

Question 2 continues on the next page

- (d) Explain how negative feedback is involved in maintaining the concentration of cholesterol inside a cell below a certain maximum.

.....

.....

.....

.....

.....

.....

(3 marks)

- (e) (i) What is the evidence from **Figure 1** that the enzyme which converts HMGCoA to mevalonic acid is a reductase?

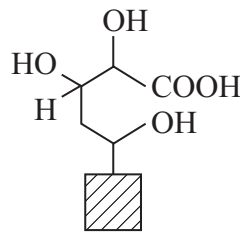
.....

.....

(1 mark)

- (ii) Compactin is an example of a statin. Its molecular structure is shown in **Figure 2**.

Figure 2



Explain how compactin lowers blood cholesterol concentration.

.....

.....

.....

.....

.....

.....

(3 marks)

